

HALLOWEEN COUNTING (C)


Name: _____

Date: _____

Score: _____ /4

Count the number of items in each group, if you dare!


1. There are witches.



2. There are jack-o'-lanterns.



3. There are ghosts.



4. There are bats.



HALLOWEEN COUNTING (C) ANSWERS


Name: _____

Date: _____

Score: _____ /4

Count the number of items in each group, if you dare!


1. There are witches.



2. There are jack-o'-lanterns.



3. There are ghosts.



4. There are bats.

