

# HALLOWEEN COUNTING (E)


Name: \_\_\_\_\_

Date: \_\_\_\_\_

Score: \_\_\_\_\_ /4

Count the number of items in each group, if you dare!

1. There are  witches.




2. There are  bats.



3. There are  jack-o'-lanterns.



4. There are  ghosts.



# HALLOWEEN COUNTING (E) ANSWERS


Name: \_\_\_\_\_

Date: \_\_\_\_\_

Score: \_\_\_\_\_ /4

Count the number of items in each group, if you dare!

1. There are  witches.



2. There are  bats.



3. There are  jack-o'-lanterns.



4. There are  ghosts.

