

HALLOWEEN COUNTING (F)

Name: _____

Date: _____


Score: _____ /4

Count the number of items in each group, if you dare!

1. There are bats.



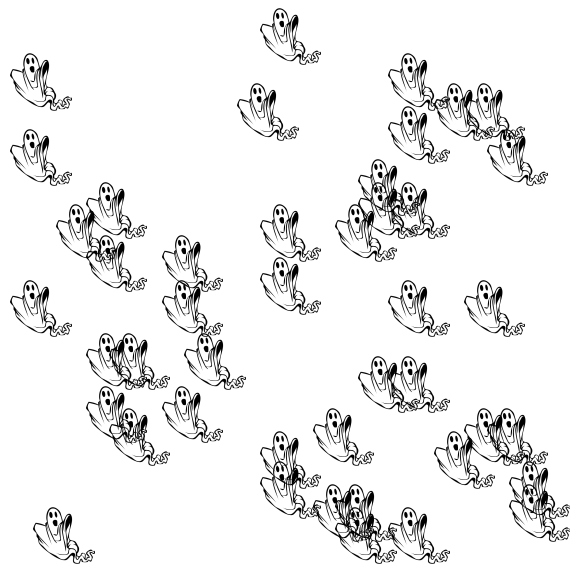
2. There are witches.



3. There are jack-o'-lanterns.



4. There are ghosts.



HALLOWEEN COUNTING (F) ANSWERS

Name: _____

Date: _____


Score: _____ /4

Count the number of items in each group, if you dare!

1. There are bats.



2. There are witches.



3. There are jack-o'-lanterns.



4. There are ghosts.

