

# HALLOWEEN COUNTING (A)


Name: \_\_\_\_\_

Date: \_\_\_\_\_


Score: \_\_\_\_\_ /4

Count the number of items in each group, if you dare!

1. There are  bats.




2. There are  witches.



3. There are  jack-o'-lanterns.



4. There are  ghosts.



# HALLOWEEN COUNTING (A) ANSWERS


Name: \_\_\_\_\_

Date: \_\_\_\_\_


Score: \_\_\_\_\_ /4

Count the number of items in each group, if you dare!

1. There are  bats.




2. There are  witches.



3. There are  jack-o'-lanterns.



4. There are  ghosts.



# HALLOWEEN COUNTING (B)


Name: \_\_\_\_\_

Date: \_\_\_\_\_

Score: \_\_\_\_\_ /4

Count the number of items in each group, if you dare!

1. There are  ghosts.




2. There are  bats.



3. There are  jack-o'-lanterns.



4. There are  witches.



# HALLOWEEN COUNTING (B) ANSWERS


Name: \_\_\_\_\_

Date: \_\_\_\_\_

Score: \_\_\_\_\_ /4

Count the number of items in each group, if you dare!

1. There are  ghosts.




2. There are  bats.



3. There are  jack-o'-lanterns.



4. There are  witches.



# HALLOWEEN COUNTING (C)

Name: \_\_\_\_\_

Date: \_\_\_\_\_

Score: \_\_\_\_\_ /4

Count the number of items in each group, if you dare!


1. There are  jack-o'-lanterns.



2. There are  witches.



3. There are  ghosts.



4. There are  bats.



# HALLOWEEN COUNTING (C) ANSWERS

Name: \_\_\_\_\_

Date: \_\_\_\_\_

Score: \_\_\_\_\_ /4

Count the number of items in each group, if you dare!


1. There are  jack-o'-lanterns.



2. There are  witches.



3. There are  ghosts.



4. There are  bats.



# HALLOWEEN COUNTING (D)


Name: \_\_\_\_\_

Date: \_\_\_\_\_

Score: \_\_\_\_\_ /4

Count the number of items in each group, if you dare!

1. There are  witches.



2. There are  jack-o'-lanterns.



3. There are  bats.



4. There are  ghosts.



# HALLOWEEN COUNTING (D) ANSWERS


Name: \_\_\_\_\_

Date: \_\_\_\_\_

Score: \_\_\_\_\_ /4

Count the number of items in each group, if you dare!

1. There are  witches.



2. There are  jack-o'-lanterns.



3. There are  bats.



4. There are  ghosts.





# HALLOWEEN COUNTING (E)


Name: \_\_\_\_\_

Date: \_\_\_\_\_

Score: \_\_\_\_\_ /4

Count the number of items in each group, if you dare!


1. There are  ghosts.



2. There are  bats.



3. There are  witches.



4. There are  jack-o'-lanterns.



# HALLOWEEN COUNTING (E) ANSWERS


Name: \_\_\_\_\_

Date: \_\_\_\_\_

Score: \_\_\_\_\_ /4

Count the number of items in each group, if you dare!


1. There are  ghosts.



2. There are  bats.



3. There are  witches.



4. There are  jack-o'-lanterns.



# HALLOWEEN COUNTING (F)


Name: \_\_\_\_\_

Date: \_\_\_\_\_

Score: \_\_\_\_\_ /4

Count the number of items in each group, if you dare!

1. There are  ghosts.



2. There are  jack-o'-lanterns.



3. There are  witches.



4. There are  bats.



# HALLOWEEN COUNTING (F) ANSWERS


Name: \_\_\_\_\_

Date: \_\_\_\_\_

Score: \_\_\_\_\_ /4

Count the number of items in each group, if you dare!


1. There are  ghosts.




2. There are  jack-o'-lanterns.



3. There are  witches.



4. There are  bats.



# HALLOWEEN COUNTING (9)

Name: \_\_\_\_\_

Date: \_\_\_\_\_

Score: \_\_\_\_\_ /4

Count the number of items in each group, if you dare!

1. There are  bats.




2. There are  jack-o'-lanterns.



3. There are  witches.



4. There are  ghosts.



# HALLOWEEN COUNTING (Q) ANSWERS

Name: \_\_\_\_\_

Date: \_\_\_\_\_

Score: \_\_\_\_\_ /4

Count the number of items in each group, if you dare!

1. There are  bats.




2. There are  jack-o'-lanterns.



3. There are  witches.



4. There are  ghosts.



# HALLOWEEN COUNTING (H)


Name: \_\_\_\_\_

Date: \_\_\_\_\_

Score: \_\_\_\_\_ /4

Count the number of items in each group, if you dare!

1. There are  witches.




2. There are  jack-o'-lanterns.



3. There are  bats.



4. There are  ghosts.



# HALLOWEEN COUNTING (H) ANSWERS


Name: \_\_\_\_\_

Date: \_\_\_\_\_

Score: \_\_\_\_\_ /4

Count the number of items in each group, if you dare!

1. There are  witches.




2. There are  jack-o'-lanterns.



3. There are  bats.



4. There are  ghosts.





# HALLOWEEN COUNTING (1)


Name: \_\_\_\_\_

Date: \_\_\_\_\_

Score: \_\_\_\_\_ /4

Count the number of items in each group, if you dare!


1. There are  ghosts.




2. There are  jack-o'-lanterns.



3. There are  witches.



4. There are  bats.



# HALLOWEEN COUNTING (D) ANSWERS


Name: \_\_\_\_\_

Date: \_\_\_\_\_

Score: \_\_\_\_\_ /4

Count the number of items in each group, if you dare!


1. There are  ghosts.




2. There are  jack-o'-lanterns.



3. There are  witches.



4. There are  bats.



# HALLOWEEN COUNTING (J)


Name: \_\_\_\_\_

Date: \_\_\_\_\_


Score: \_\_\_\_\_ /4

Count the number of items in each group, if you dare!

1. There are  ghosts.




2. There are  bats.



3. There are  jack-o'-lanterns.



4. There are  witches.



# HALLOWEEN COUNTING (J) ANSWERS


Name: \_\_\_\_\_

Date: \_\_\_\_\_


Score: \_\_\_\_\_ /4

Count the number of items in each group, if you dare!

1. There are  ghosts.



2. There are  bats.



3. There are  jack-o'-lanterns.



4. There are  witches.

