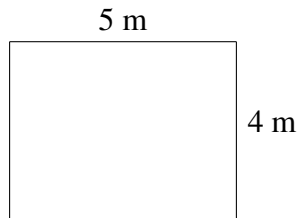
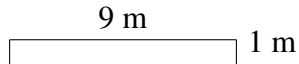
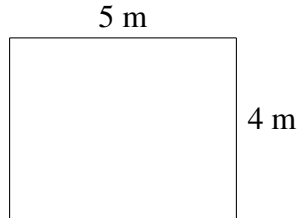


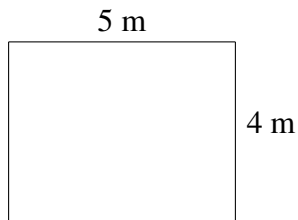
# Monster Yards (C)

Which monster has the yard with the greatest area? Greatest perimeter?

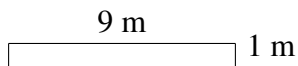


## Monster Yards (C) Answers

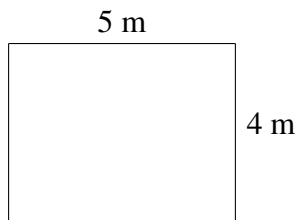
Which monster has the yard with the greatest area? Greatest perimeter?



$$A = 20 \text{ m}^2$$
$$P = 18 \text{ m}$$



$$A = 9 \text{ m}^2$$
$$P = 20 \text{ m}$$



$$A = 20 \text{ m}^2$$
$$P = 18 \text{ m}$$