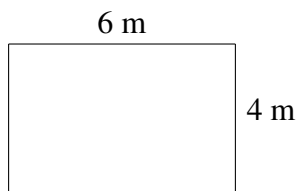
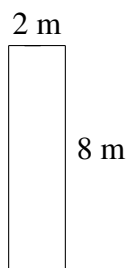
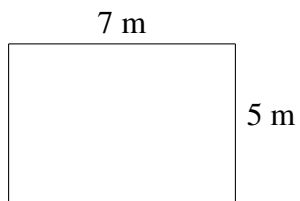


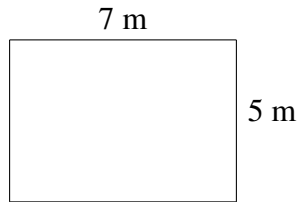
Monster Yards (E)

Which monster has the yard with the greatest area? Greatest perimeter?




Monster Yards (E) Answers

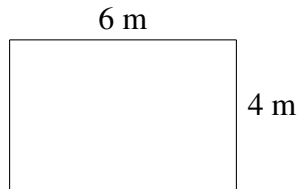
Which monster has the yard with the greatest area? Greatest perimeter?



$$A = 35 \text{ m}^2$$
$$P = 24 \text{ m}$$



$$A = 16 \text{ m}^2$$
$$P = 20 \text{ m}$$



$$A = 24 \text{ m}^2$$
$$P = 20 \text{ m}$$