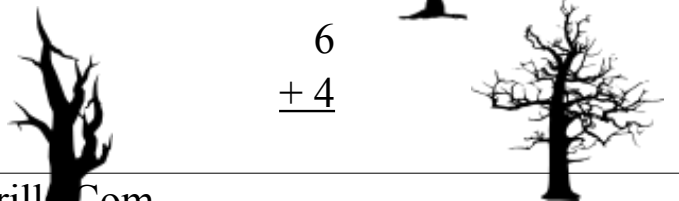
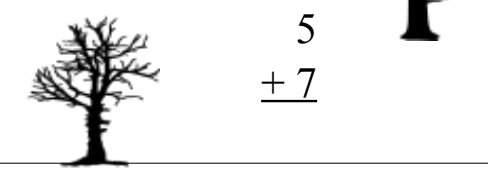
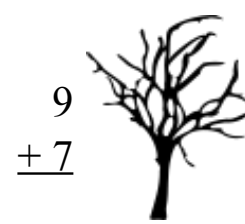
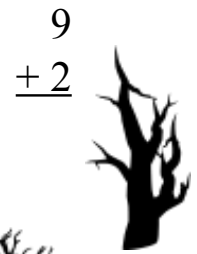
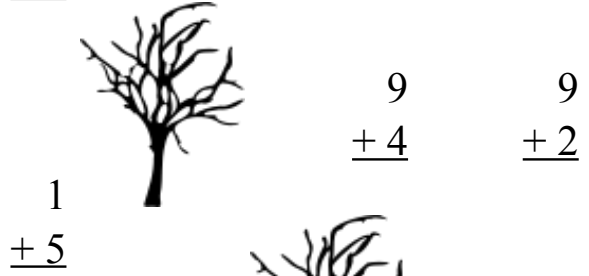
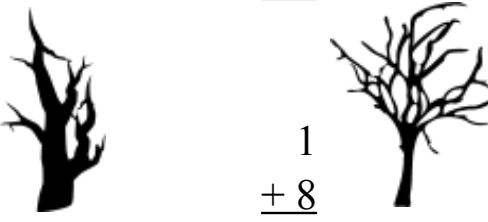
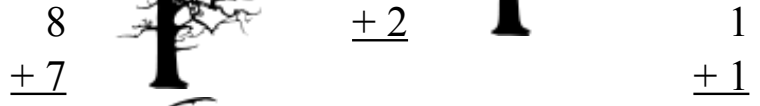
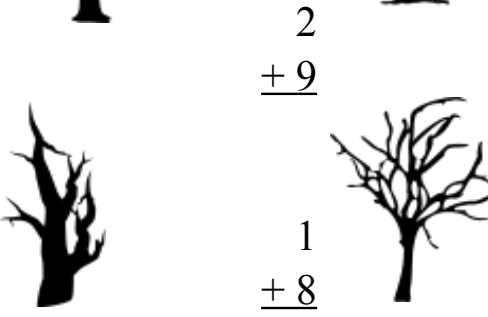
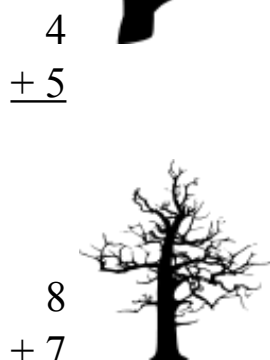
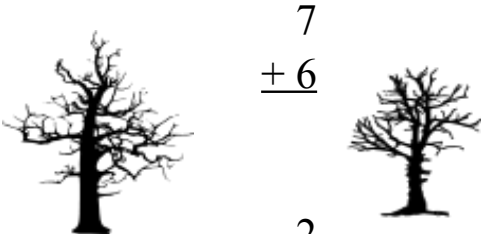
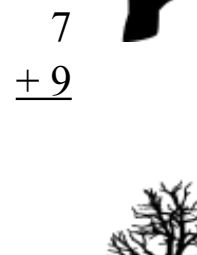
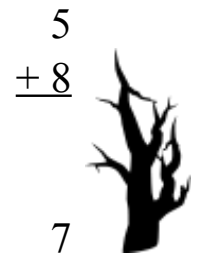
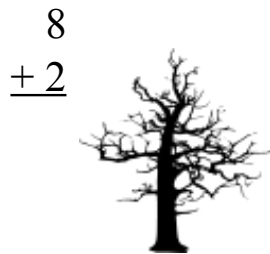
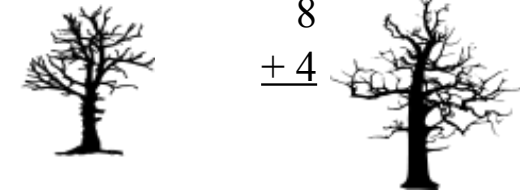
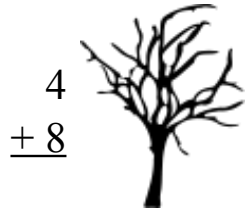


Through the Dark Forest (A)


Find each sum to find your way through the forest.







Through the Dark Forest (A) Answers


Find each sum to find your way through the forest.



$$\begin{array}{r} 2 \\ +9 \\ \hline 11 \end{array}$$


$$\begin{array}{r} 4 \\ +8 \\ \hline 12 \end{array}$$




$$\begin{array}{r} 5 \\ +3 \\ \hline 8 \end{array}$$
$$\begin{array}{r} 2 \\ +7 \\ \hline 9 \end{array}$$
$$\begin{array}{r} 1 \\ +4 \\ \hline 5 \end{array}$$


$$\begin{array}{r} 8 \\ +4 \\ \hline 12 \end{array}$$




$$\begin{array}{r} 8 \\ +2 \\ \hline 10 \end{array}$$


$$\begin{array}{r} 5 \\ +8 \\ \hline 13 \end{array}$$





$$\begin{array}{r} 1 \\ +1 \\ \hline 2 \end{array}$$




$$\begin{array}{r} 7 \\ +9 \\ \hline 16 \end{array}$$
$$\begin{array}{r} 2 \\ +6 \\ \hline 8 \end{array}$$




$$\begin{array}{r} 7 \\ +9 \\ \hline 16 \end{array}$$


$$\begin{array}{r} 7 \\ +6 \\ \hline 13 \end{array}$$



$$\begin{array}{r} 4 \\ +5 \\ \hline 9 \end{array}$$
$$\begin{array}{r} 2 \\ +6 \\ \hline 8 \end{array}$$


$$\begin{array}{r} 8 \\ +7 \\ \hline 15 \end{array}$$

$$\begin{array}{r} 1 \\ +2 \\ \hline 3 \end{array}$$
$$\begin{array}{r} 1 \\ +1 \\ \hline 2 \end{array}$$




$$\begin{array}{r} 2 \\ +9 \\ \hline 11 \end{array}$$

$$\begin{array}{r} 1 \\ +8 \\ \hline 9 \end{array}$$






$$\begin{array}{r} 8 \\ +7 \\ \hline 15 \end{array}$$
$$\begin{array}{r} 1 \\ +2 \\ \hline 3 \end{array}$$
$$\begin{array}{r} 1 \\ +1 \\ \hline 2 \end{array}$$


$$\begin{array}{r} 1 \\ +8 \\ \hline 9 \end{array}$$

$$\begin{array}{r} 1 \\ +8 \\ \hline 9 \end{array}$$


$$\begin{array}{r} 1 \\ +5 \\ \hline 6 \end{array}$$
$$\begin{array}{r} 9 \\ +4 \\ \hline 13 \end{array}$$
$$\begin{array}{r} 9 \\ +2 \\ \hline 11 \end{array}$$


$$\begin{array}{r} 9 \\ +1 \\ \hline 10 \end{array}$$

$$\begin{array}{r} 5 \\ +7 \\ \hline 12 \end{array}$$


$$\begin{array}{r} 9 \\ +7 \\ \hline 16 \end{array}$$

$$\begin{array}{r} 6 \\ +4 \\ \hline 10 \end{array}$$