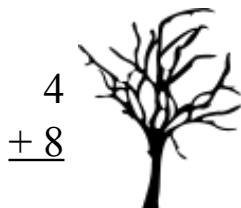


Through the Dark Forest (A)

Find each sum to find your way through the forest.



$$\begin{array}{r} 2 \\ +9 \\ \hline \end{array}$$



$$\begin{array}{r} 4 \\ +8 \\ \hline \end{array}$$



$$\begin{array}{r} 2 \\ +7 \\ \hline \end{array}$$

$$\begin{array}{r} 5 \\ +3 \\ \hline \end{array}$$

$$\begin{array}{r} 1 \\ +4 \\ \hline \end{array}$$



$$\begin{array}{r} 8 \\ +4 \\ \hline \end{array}$$



$$\begin{array}{r} 8 \\ +2 \\ \hline \end{array}$$



$$\begin{array}{r} 5 \\ +8 \\ \hline \end{array}$$



$$\begin{array}{r} 7 \\ +9 \\ \hline \end{array}$$



$$\begin{array}{r} 1 \\ +1 \\ \hline \end{array}$$



$$\begin{array}{r} 4 \\ +5 \\ \hline \end{array}$$

$$\begin{array}{r} 2 \\ +6 \\ \hline \end{array}$$



$$\begin{array}{r} 7 \\ +6 \\ \hline \end{array}$$



$$\begin{array}{r} 1 \\ +2 \\ \hline \end{array}$$



$$\begin{array}{r} 1 \\ +1 \\ \hline \end{array}$$



$$\begin{array}{r} 2 \\ +9 \\ \hline \end{array}$$



$$\begin{array}{r} 8 \\ +7 \\ \hline \end{array}$$



$$\begin{array}{r} 9 \\ +4 \\ \hline \end{array}$$

$$\begin{array}{r} 9 \\ +2 \\ \hline \end{array}$$



$$\begin{array}{r} 1 \\ +8 \\ \hline \end{array}$$

$$\begin{array}{r} 1 \\ +5 \\ \hline \end{array}$$



$$\begin{array}{r} 9 \\ +7 \\ \hline \end{array}$$



$$\begin{array}{r} 9 \\ +1 \\ \hline \end{array}$$



$$\begin{array}{r} 6 \\ +4 \\ \hline \end{array}$$



$$\begin{array}{r} 5 \\ +7 \\ \hline \end{array}$$



Through the Dark Forest (A) Answers

Find each sum to find your way through the forest.

2
+9
11

4
+8
12

5
+3
8

2
+7
9

1
+4
5

8
+4
12

8
+2
10

5
+8
13

1
+1
2

7
+9
16

4
+6
8

7
+6
13

2
+9
11

8
+7
15

1
+2
3

9
+4
13

9
+2
11

1
+8
9

1
+5
6

9
+7
16


9
+1
10

5
+7
12

6
+4
10

Through the Dark Forest (B)

Find each sum to find your way through the forest.



$$\begin{array}{r} 1 \\ +9 \\ \hline \end{array}$$

$$\begin{array}{r} 6 \\ +7 \\ \hline \end{array}$$

$$\begin{array}{r} 9 \\ +8 \\ \hline \end{array}$$



$$\begin{array}{r} 4 \\ +9 \\ \hline \end{array}$$



$$\begin{array}{r} 1 \\ +5 \\ \hline \end{array}$$



$$\begin{array}{r} 9 \\ +7 \\ \hline \end{array}$$



$$\begin{array}{r} 4 \\ +3 \\ \hline \end{array}$$



$$\begin{array}{r} 9 \\ +5 \\ \hline \end{array}$$



$$\begin{array}{r} 9 \\ +2 \\ \hline \end{array}$$



$$\begin{array}{r} 4 \\ +4 \\ \hline \end{array}$$

$$\begin{array}{r} 7 \\ +7 \\ \hline \end{array}$$

$$\begin{array}{r} 7 \\ +9 \\ \hline \end{array}$$



$$\begin{array}{r} 2 \\ +7 \\ \hline \end{array}$$



$$\begin{array}{r} 3 \\ +1 \\ \hline \end{array}$$



$$\begin{array}{r} 4 \\ +2 \\ \hline \end{array}$$

$$\begin{array}{r} 5 \\ +6 \\ \hline \end{array}$$

$$\begin{array}{r} 9 \\ +1 \\ \hline \end{array}$$



$$\begin{array}{r} 6 \\ +1 \\ \hline \end{array}$$



$$\begin{array}{r} 7 \\ +7 \\ \hline \end{array}$$

$$\begin{array}{r} 4 \\ +6 \\ \hline \end{array}$$



$$\begin{array}{r} 9 \\ +8 \\ \hline \end{array}$$

$$\begin{array}{r} 2 \\ +1 \\ \hline \end{array}$$



$$\begin{array}{r} 8 \\ +3 \\ \hline \end{array}$$



$$\begin{array}{r} 8 \\ +3 \\ \hline \end{array}$$



$$\begin{array}{r} 8 \\ +2 \\ \hline \end{array}$$



Through the Dark Forest (B) Answers

Find each sum to find your way through the forest.

The forest path is a winding line of trees. Each tree is accompanied by a simple addition problem. The numbers in the problems are black, and the answers are red. The path starts at the top left and ends at the bottom right.

1
 $\begin{array}{r} 1 \\ +9 \\ \hline 10 \end{array}$

6
 $\begin{array}{r} 6 \\ +7 \\ \hline 13 \end{array}$

9
 $\begin{array}{r} 9 \\ +8 \\ \hline 17 \end{array}$

4
 $\begin{array}{r} 4 \\ +9 \\ \hline 13 \end{array}$

1
 $\begin{array}{r} 1 \\ +5 \\ \hline 6 \end{array}$

9
 $\begin{array}{r} 9 \\ +7 \\ \hline 16 \end{array}$

4
 $\begin{array}{r} 4 \\ +3 \\ \hline 7 \end{array}$

9
 $\begin{array}{r} 9 \\ +5 \\ \hline 14 \end{array}$

9
 $\begin{array}{r} 9 \\ +2 \\ \hline 11 \end{array}$

7
 $\begin{array}{r} 7 \\ +4 \\ \hline 11 \end{array}$

7
 $\begin{array}{r} 7 \\ +9 \\ \hline 16 \end{array}$

4
 $\begin{array}{r} 4 \\ +4 \\ \hline 8 \end{array}$

2
 $\begin{array}{r} 2 \\ +7 \\ \hline 9 \end{array}$

7
 $\begin{array}{r} 7 \\ +7 \\ \hline 14 \end{array}$

9
 $\begin{array}{r} 9 \\ +1 \\ \hline 10 \end{array}$

3
 $\begin{array}{r} 3 \\ +1 \\ \hline 4 \end{array}$

4
 $\begin{array}{r} 4 \\ +2 \\ \hline 6 \end{array}$

5
 $\begin{array}{r} 5 \\ +6 \\ \hline 11 \end{array}$

9
 $\begin{array}{r} 9 \\ +1 \\ \hline 10 \end{array}$

4
 $\begin{array}{r} 4 \\ +2 \\ \hline 6 \end{array}$

6
 $\begin{array}{r} 6 \\ +1 \\ \hline 7 \end{array}$

9
 $\begin{array}{r} 9 \\ +8 \\ \hline 17 \end{array}$

7
 $\begin{array}{r} 7 \\ +7 \\ \hline 14 \end{array}$

4
 $\begin{array}{r} 4 \\ +6 \\ \hline 10 \end{array}$

2
 $\begin{array}{r} 2 \\ +1 \\ \hline 3 \end{array}$

8
 $\begin{array}{r} 8 \\ +3 \\ \hline 11 \end{array}$

8
 $\begin{array}{r} 8 \\ +3 \\ \hline 11 \end{array}$

8
 $\begin{array}{r} 8 \\ +2 \\ \hline 10 \end{array}$

2
 $\begin{array}{r} 2 \\ +1 \\ \hline 3 \end{array}$

8
 $\begin{array}{r} 8 \\ +3 \\ \hline 11 \end{array}$

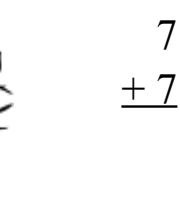
8
 $\begin{array}{r} 8 \\ +2 \\ \hline 10 \end{array}$

Through the Dark Forest (C)

Find each sum to find your way through the forest.



$$\begin{array}{r} 5 \\ +4 \\ \hline \end{array}$$



$$\begin{array}{r} 9 \\ +9 \\ \hline \end{array}$$

$$\begin{array}{r} 7 \\ +7 \\ \hline \end{array}$$



$$\begin{array}{r} 4 \\ +6 \\ \hline \end{array}$$



$$\begin{array}{r} 2 \\ +2 \\ \hline \end{array}$$

$$\begin{array}{r} 5 \\ +3 \\ \hline \end{array}$$



$$\begin{array}{r} 8 \\ +6 \\ \hline \end{array}$$



$$\begin{array}{r} 6 \\ +2 \\ \hline \end{array}$$



$$\begin{array}{r} 3 \\ +8 \\ \hline \end{array}$$



$$\begin{array}{r} 1 \\ +4 \\ \hline \end{array}$$



$$\begin{array}{r} 5 \\ +7 \\ \hline \end{array}$$



$$\begin{array}{r} 9 \\ +4 \\ \hline \end{array}$$

$$\begin{array}{r} 9 \\ +8 \\ \hline \end{array}$$



$$\begin{array}{r} 9 \\ +3 \\ \hline \end{array}$$



$$\begin{array}{r} 6 \\ +6 \\ \hline \end{array}$$



$$\begin{array}{r} 6 \\ +2 \\ \hline \end{array}$$

$$\begin{array}{r} 8 \\ +4 \\ \hline \end{array}$$



$$\begin{array}{r} 7 \\ +4 \\ \hline \end{array}$$



$$\begin{array}{r} 5 \\ +3 \\ \hline \end{array}$$




$$\begin{array}{r} 4 \\ +1 \\ \hline \end{array}$$



$$\begin{array}{r} 8 \\ +5 \\ \hline \end{array}$$



$$\begin{array}{r} 6 \\ +5 \\ \hline \end{array}$$




$$\begin{array}{r} 8 \\ +2 \\ \hline \end{array}$$



$$\begin{array}{r} 7 \\ +8 \\ \hline \end{array}$$



$$\begin{array}{r} 1 \\ +2 \\ \hline \end{array}$$



Through the Dark Forest (C) Answers

Find each sum to find your way through the forest.

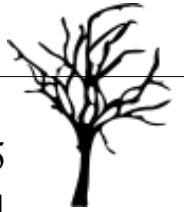


$$\begin{array}{r} 7 \\ +8 \\ \hline 15 \end{array}$$



$$\begin{array}{r} 4 \\ +6 \\ \hline 10 \end{array}$$

$$\begin{array}{r} 5 \\ +4 \\ \hline 9 \end{array}$$



$$\begin{array}{r} 9 \\ +9 \\ \hline 18 \end{array}$$



$$\begin{array}{r} 7 \\ +7 \\ \hline 14 \end{array}$$



$$\begin{array}{r} 1 \\ +4 \\ \hline 5 \end{array}$$



$$\begin{array}{r} 2 \\ +2 \\ \hline 4 \end{array}$$



$$\begin{array}{r} 5 \\ +3 \\ \hline 8 \end{array}$$



$$\begin{array}{r} 1 \\ +2 \\ \hline 3 \end{array}$$



$$\begin{array}{r} 8 \\ +6 \\ \hline 14 \end{array}$$

$$\begin{array}{r} 3 \\ +8 \\ \hline 11 \end{array}$$

$$\begin{array}{r} 6 \\ +2 \\ \hline 8 \end{array}$$



$$\begin{array}{r} 5 \\ +7 \\ \hline 12 \end{array}$$



$$\begin{array}{r} 9 \\ +4 \\ \hline 13 \end{array}$$



$$\begin{array}{r} 9 \\ +8 \\ \hline 17 \end{array}$$



$$\begin{array}{r} 6 \\ +6 \\ \hline 12 \end{array}$$



$$\begin{array}{r} 9 \\ +3 \\ \hline 12 \end{array}$$



$$\begin{array}{r} 6 \\ +2 \\ \hline 8 \end{array}$$

$$\begin{array}{r} 8 \\ +4 \\ \hline 12 \end{array}$$



$$\begin{array}{r} 5 \\ +3 \\ \hline 8 \end{array}$$

$$\begin{array}{r} 7 \\ +4 \\ \hline 11 \end{array}$$

$$\begin{array}{r} 4 \\ +1 \\ \hline 5 \end{array}$$



$$\begin{array}{r} 8 \\ +5 \\ \hline 13 \end{array}$$



$$\begin{array}{r} 6 \\ +5 \\ \hline 11 \end{array}$$




$$\begin{array}{r} 8 \\ +2 \\ \hline 10 \end{array}$$



Through the Dark Forest (D)

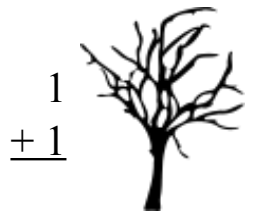
Find each sum to find your way through the forest.



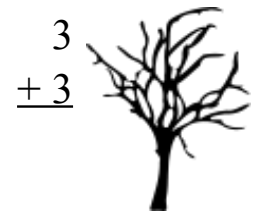
$$\begin{array}{r} 2 \\ +9 \\ \hline \end{array}$$



$$\begin{array}{r} 7 \\ +9 \\ \hline \end{array}$$



$$\begin{array}{r} 1 \\ +1 \\ \hline \end{array}$$



$$\begin{array}{r} 3 \\ +3 \\ \hline \end{array}$$

$$\begin{array}{r} 7 \\ +7 \\ \hline \end{array}$$



$$\begin{array}{r} 2 \\ +5 \\ \hline \end{array}$$



$$\begin{array}{r} 4 \\ +5 \\ \hline \end{array}$$



$$\begin{array}{r} 3 \\ +5 \\ \hline \end{array}$$



$$\begin{array}{r} 3 \\ +5 \\ \hline \end{array}$$



$$\begin{array}{r} 6 \\ +6 \\ \hline \end{array}$$



$$\begin{array}{r} 6 \\ +1 \\ \hline \end{array}$$

$$\begin{array}{r} 9 \\ +3 \\ \hline \end{array}$$



$$\begin{array}{r} 5 \\ +2 \\ \hline \end{array}$$



$$\begin{array}{r} 6 \\ +3 \\ \hline \end{array}$$



$$\begin{array}{r} 6 \\ +9 \\ \hline \end{array}$$

$$\begin{array}{r} 4 \\ +2 \\ \hline \end{array}$$



$$\begin{array}{r} 8 \\ +4 \\ \hline \end{array}$$



$$\begin{array}{r} 6 \\ +3 \\ \hline \end{array}$$



$$\begin{array}{r} 3 \\ +2 \\ \hline \end{array}$$



$$\begin{array}{r} 7 \\ +7 \\ \hline \end{array}$$

$$\begin{array}{r} 9 \\ +4 \\ \hline \end{array}$$



$$\begin{array}{r} 4 \\ +7 \\ \hline \end{array}$$



$$\begin{array}{r} 7 \\ +2 \\ \hline \end{array}$$



$$\begin{array}{r} 7 \\ +4 \\ \hline \end{array}$$



$$\begin{array}{r} 4 \\ +3 \\ \hline \end{array}$$



$$\begin{array}{r} 4 \\ +3 \\ \hline \end{array}$$



$$\begin{array}{r} 7 \\ +4 \\ \hline \end{array}$$

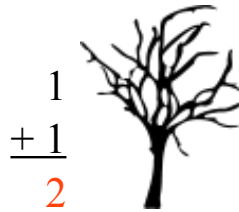


Through the Dark Forest (D) Answers

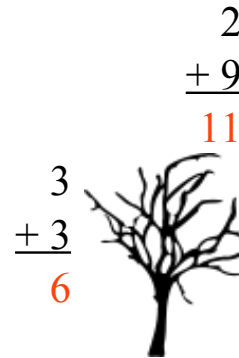
Find each sum to find your way through the forest.



$$\begin{array}{r} 7 \\ +9 \\ \hline 16 \end{array}$$



$$\begin{array}{r} 1 \\ +1 \\ \hline 2 \end{array}$$



$$\begin{array}{r} 2 \\ +9 \\ \hline 11 \end{array}$$

$$\begin{array}{r} 7 \\ +7 \\ \hline 14 \end{array}$$



$$\begin{array}{r} 2 \\ +5 \\ \hline 7 \end{array}$$



$$\begin{array}{r} 4 \\ +5 \\ \hline 9 \end{array}$$



$$\begin{array}{r} 3 \\ +5 \\ \hline 8 \end{array}$$



$$\begin{array}{r} 6 \\ +6 \\ \hline 12 \end{array}$$



$$\begin{array}{r} 3 \\ +5 \\ \hline 8 \end{array}$$



$$\begin{array}{r} 5 \\ +2 \\ \hline 7 \end{array}$$



$$\begin{array}{r} 6 \\ +1 \\ \hline 7 \end{array}$$

$$\begin{array}{r} 9 \\ +3 \\ \hline 12 \end{array}$$



$$\begin{array}{r} 6 \\ +3 \\ \hline 9 \end{array}$$



$$\begin{array}{r} 6 \\ +9 \\ \hline 15 \end{array}$$



$$\begin{array}{r} 4 \\ +2 \\ \hline 6 \end{array}$$



$$\begin{array}{r} 8 \\ +4 \\ \hline 12 \end{array}$$



$$\begin{array}{r} 6 \\ +3 \\ \hline 9 \end{array}$$



$$\begin{array}{r} 3 \\ +2 \\ \hline 5 \end{array}$$



$$\begin{array}{r} 7 \\ +7 \\ \hline 14 \end{array}$$

$$\begin{array}{r} 9 \\ +4 \\ \hline 13 \end{array}$$



$$\begin{array}{r} 4 \\ +7 \\ \hline 11 \end{array}$$



$$\begin{array}{r} 3 \\ +2 \\ \hline 5 \end{array}$$

$$\begin{array}{r} 7 \\ +2 \\ \hline 9 \end{array}$$




$$\begin{array}{r} 4 \\ +3 \\ \hline 7 \end{array}$$

$$\begin{array}{r} 7 \\ +4 \\ \hline 11 \end{array}$$

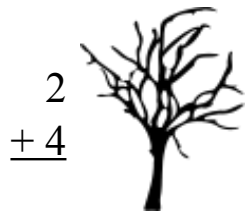


Through the Dark Forest (E)

Find each sum to find your way through the forest.



$$\begin{array}{r} 3 \\ +6 \\ \hline \end{array}$$



$$\begin{array}{r} 2 \\ +4 \\ \hline \end{array}$$

$$\begin{array}{r} 5 \\ +3 \\ \hline \end{array}$$



$$\begin{array}{r} 4 \\ +3 \\ \hline \end{array}$$



$$\begin{array}{r} 6 \\ +9 \\ \hline \end{array}$$



$$\begin{array}{r} 3 \\ +7 \\ \hline \end{array}$$



$$\begin{array}{r} 4 \\ +7 \\ \hline \end{array}$$



$$\begin{array}{r} 7 \\ +5 \\ \hline \end{array}$$



$$\begin{array}{r} 7 \\ +1 \\ \hline \end{array}$$

$$\begin{array}{r} 7 \\ +6 \\ \hline \end{array}$$

$$\begin{array}{r} 7 \\ +2 \\ \hline \end{array}$$



$$\begin{array}{r} 2 \\ +7 \\ \hline \end{array}$$



$$\begin{array}{r} 8 \\ +3 \\ \hline \end{array}$$

$$\begin{array}{r} 5 \\ +6 \\ \hline \end{array}$$



$$\begin{array}{r} 5 \\ +6 \\ \hline \end{array}$$



$$\begin{array}{r} 2 \\ +3 \\ \hline \end{array}$$



$$\begin{array}{r} 5 \\ +3 \\ \hline \end{array}$$

$$\begin{array}{r} 2 \\ +3 \\ \hline \end{array}$$

$$\begin{array}{r} 5 \\ +7 \\ \hline \end{array}$$



$$\begin{array}{r} 2 \\ +7 \\ \hline \end{array}$$



$$\begin{array}{r} 2 \\ +7 \\ \hline \end{array}$$



$$\begin{array}{r} 5 \\ +6 \\ \hline \end{array}$$



$$\begin{array}{r} 5 \\ +1 \\ \hline \end{array}$$

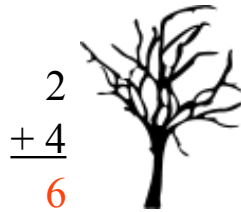


Through the Dark Forest (E) Answers


Find each sum to find your way through the forest.



$$\begin{array}{r} 3 \\ +6 \\ \hline 9 \end{array}$$



$$\begin{array}{r} 2 \\ +4 \\ \hline 6 \end{array}$$



$$\begin{array}{r} 9 \\ +8 \\ \hline 17 \end{array}$$

$$\begin{array}{r} 4 \\ +3 \\ \hline 7 \end{array}$$



$$\begin{array}{r} 6 \\ +9 \\ \hline 15 \end{array}$$



$$\begin{array}{r} 3 \\ +7 \\ \hline 10 \end{array}$$



$$\begin{array}{r} 4 \\ +7 \\ \hline 11 \end{array}$$



$$\begin{array}{r} 7 \\ +5 \\ \hline 12 \end{array}$$



$$\begin{array}{r} 7 \\ +1 \\ \hline 8 \end{array}$$



$$\begin{array}{r} 2 \\ +7 \\ \hline 9 \end{array}$$



$$\begin{array}{r} 7 \\ +6 \\ \hline 13 \end{array}$$



$$\begin{array}{r} 7 \\ +2 \\ \hline 9 \end{array}$$



$$\begin{array}{r} 2 \\ +3 \\ \hline 5 \end{array}$$



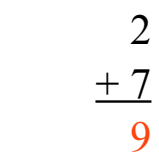
$$\begin{array}{r} 8 \\ +3 \\ \hline 11 \end{array}$$



$$\begin{array}{r} 5 \\ +6 \\ \hline 11 \end{array}$$



$$\begin{array}{r} 5 \\ +6 \\ \hline 11 \end{array}$$



$$\begin{array}{r} 2 \\ +7 \\ \hline 9 \end{array}$$



$$\begin{array}{r} 5 \\ +3 \\ \hline 8 \end{array}$$

$$\begin{array}{r} 2 \\ +7 \\ \hline 9 \end{array}$$



$$\begin{array}{r} 2 \\ +3 \\ \hline 5 \end{array}$$

$$\begin{array}{r} 5 \\ +7 \\ \hline 12 \end{array}$$



$$\begin{array}{r} 5 \\ +6 \\ \hline 11 \end{array}$$

$$\begin{array}{r} 5 \\ +1 \\ \hline 6 \end{array}$$

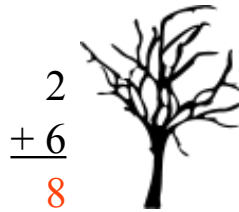


Through the Dark Forest (F) Answers


Find each sum to find your way through the forest.




$$\begin{array}{r} 3 \\ +7 \\ \hline 10 \end{array}$$



$$\begin{array}{r} 2 \\ +6 \\ \hline 8 \end{array}$$



$$\begin{array}{r} 5 \\ +6 \\ \hline 11 \\ 8 \\ +8 \\ \hline 16 \end{array}$$



$$\begin{array}{r} 9 \\ +8 \\ \hline 17 \end{array}$$



$$\begin{array}{r} 9 \\ +9 \\ \hline 18 \end{array}$$



$$\begin{array}{r} 5 \\ +6 \\ \hline 11 \end{array}$$



$$\begin{array}{r} 4 \\ +5 \\ \hline 9 \end{array}$$



$$\begin{array}{r} 7 \\ +2 \\ \hline 9 \end{array}$$



$$\begin{array}{r} 3 \\ +2 \\ \hline 5 \end{array}$$



$$\begin{array}{r} 2 \\ +6 \\ \hline 8 \end{array}$$



$$\begin{array}{r} 4 \\ +7 \\ \hline 11 \end{array}$$



$$\begin{array}{r} 4 \\ +4 \\ \hline 8 \end{array}$$



$$\begin{array}{r} 8 \\ +4 \\ \hline 12 \end{array}$$



$$\begin{array}{r} 9 \\ +6 \\ \hline 15 \end{array}$$



$$\begin{array}{r} 6 \\ +3 \\ \hline 9 \end{array}$$



$$\begin{array}{r} 6 \\ +7 \\ \hline 13 \end{array}$$



$$\begin{array}{r} 1 \\ +4 \\ \hline 5 \end{array}$$



$$\begin{array}{r} 1 \\ +5 \\ \hline 6 \end{array}$$



$$\begin{array}{r} 3 \\ +1 \\ \hline 4 \end{array}$$

$$\begin{array}{r} 5 \\ +3 \\ \hline 8 \end{array}$$



$$\begin{array}{r} 6 \\ +2 \\ \hline 8 \end{array}$$



$$\begin{array}{r} 3 \\ +1 \\ \hline 4 \end{array}$$



$$\begin{array}{r} 5 \\ +4 \\ \hline 9 \end{array}$$

$$\begin{array}{r} 6 \\ +8 \\ \hline 14 \end{array}$$



Through the Dark Forest (G)

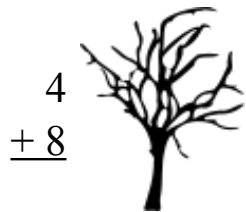
Find each sum to find your way through the forest.



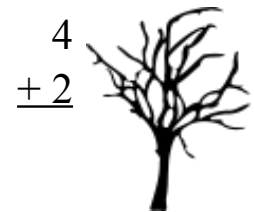
$$\begin{array}{r} 3 \\ +3 \\ \hline \end{array}$$



$$\begin{array}{r} 4 \\ +7 \\ \hline \end{array}$$



$$\begin{array}{r} 4 \\ +8 \\ \hline \end{array}$$



$$\begin{array}{r} 4 \\ +2 \\ \hline \end{array}$$

$$\begin{array}{r} 4 \\ +6 \\ \hline \end{array}$$



$$\begin{array}{r} 6 \\ +8 \\ \hline \end{array}$$



$$\begin{array}{r} 6 \\ +4 \\ \hline \end{array}$$



$$\begin{array}{r} 5 \\ +5 \\ \hline \end{array}$$



$$\begin{array}{r} 2 \\ +6 \\ \hline \end{array}$$



$$\begin{array}{r} 8 \\ +9 \\ \hline \end{array}$$



$$\begin{array}{r} 9 \\ +9 \\ \hline \end{array}$$

$$\begin{array}{r} 8 \\ +3 \\ \hline \end{array}$$



$$\begin{array}{r} 3 \\ +6 \\ \hline \end{array}$$



$$\begin{array}{r} 1 \\ +5 \\ \hline \end{array}$$



$$\begin{array}{r} 1 \\ +2 \\ \hline \end{array}$$



$$\begin{array}{r} 6 \\ +8 \\ \hline \end{array}$$

$$\begin{array}{r} 7 \\ +2 \\ \hline \end{array}$$



$$\begin{array}{r} 1 \\ +2 \\ \hline \end{array}$$



$$\begin{array}{r} 4 \\ +6 \\ \hline \end{array}$$

$$\begin{array}{r} 4 \\ +9 \\ \hline \end{array}$$



$$\begin{array}{r} 7 \\ +3 \\ \hline \end{array}$$



$$\begin{array}{r} 6 \\ +6 \\ \hline \end{array}$$



$$\begin{array}{r} 8 \\ +5 \\ \hline \end{array}$$




$$\begin{array}{r} 2 \\ +5 \\ \hline \end{array}$$







Through the Dark Forest (G) Answers


Find each sum to find your way through the forest.

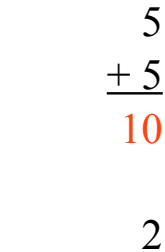


$$\begin{array}{r} 4 \\ +7 \\ \hline 11 \end{array}$$


$$\begin{array}{r} 4 \\ +8 \\ \hline 12 \end{array}$$


$$\begin{array}{r} 3 \\ +3 \\ \hline 6 \end{array}$$

$$\begin{array}{r} 4 \\ +6 \\ \hline 10 \end{array}$$


$$\begin{array}{r} 6 \\ +8 \\ \hline 14 \end{array}$$





$$\begin{array}{r} 6 \\ +4 \\ \hline 10 \end{array}$$



$$\begin{array}{r} 5 \\ +5 \\ \hline 10 \end{array}$$



$$\begin{array}{r} 8 \\ +9 \\ \hline 17 \end{array}$$


$$\begin{array}{r} 2 \\ +6 \\ \hline 8 \end{array}$$




$$\begin{array}{r} 8 \\ +3 \\ \hline 11 \end{array}$$


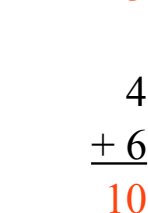
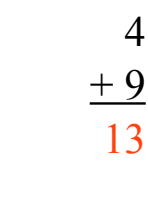



$$\begin{array}{r} 3 \\ +6 \\ \hline 9 \end{array}$$



$$\begin{array}{r} 9 \\ +9 \\ \hline 18 \end{array}$$


$$\begin{array}{r} 1 \\ +2 \\ \hline 3 \end{array}$$

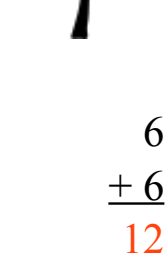
$$\begin{array}{r} 6 \\ +8 \\ \hline 14 \end{array}$$






$$\begin{array}{r} 7 \\ +2 \\ \hline 9 \end{array}$$

$$\begin{array}{r} 9 \\ +6 \\ \hline 15 \end{array}$$



$$\begin{array}{r} 1 \\ +5 \\ \hline 6 \end{array}$$

$$\begin{array}{r} 4 \\ +6 \\ \hline 10 \end{array}$$

$$\begin{array}{r} 4 \\ +9 \\ \hline 13 \end{array}$$


$$\begin{array}{r} 7 \\ +3 \\ \hline 10 \end{array}$$


$$\begin{array}{r} 9 \\ +6 \\ \hline 15 \end{array}$$

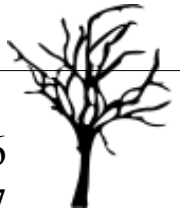

$$\begin{array}{r} 1 \\ +2 \\ \hline 3 \end{array}$$
$$\begin{array}{r} 6 \\ +6 \\ \hline 12 \end{array}$$


$$\begin{array}{r} 4 \\ +6 \\ \hline 10 \end{array}$$

$$\begin{array}{r} 2 \\ +5 \\ \hline 7 \end{array}$$



$$\begin{array}{r} 8 \\ +5 \\ \hline 13 \end{array}$$

Through the Dark Forest (H)

Find each sum to find your way through the forest.



$$\begin{array}{r} 6 \\ +7 \\ \hline \end{array}$$



$$\begin{array}{r} 5 \\ +4 \\ \hline \end{array}$$

$$\begin{array}{r} 6 \\ +9 \\ \hline \end{array}$$



$$\begin{array}{r} 9 \\ +6 \\ \hline \end{array}$$



$$\begin{array}{r} 4 \\ +7 \\ \hline \end{array}$$



$$\begin{array}{r} 1 \\ +4 \\ \hline \end{array}$$



$$\begin{array}{r} 2 \\ +3 \\ \hline \end{array}$$



$$\begin{array}{r} 7 \\ +7 \\ \hline \end{array}$$



$$\begin{array}{r} 5 \\ +9 \\ \hline \end{array}$$



$$\begin{array}{r} 5 \\ +2 \\ \hline \end{array}$$

$$\begin{array}{r} 6 \\ +4 \\ \hline \end{array}$$

$$\begin{array}{r} 7 \\ +6 \\ \hline \end{array}$$



$$\begin{array}{r} 9 \\ +7 \\ \hline \end{array}$$



$$\begin{array}{r} 4 \\ +5 \\ \hline \end{array}$$



$$\begin{array}{r} 7 \\ +9 \\ \hline \end{array}$$



$$\begin{array}{r} 9 \\ +9 \\ \hline \end{array}$$



$$\begin{array}{r} 9 \\ +4 \\ \hline \end{array}$$



$$\begin{array}{r} 4 \\ +7 \\ \hline \end{array}$$

$$\begin{array}{r} 7 \\ +5 \\ \hline \end{array}$$



$$\begin{array}{r} 8 \\ +3 \\ \hline \end{array}$$

$$\begin{array}{r} 9 \\ +4 \\ \hline \end{array}$$

$$\begin{array}{r} 8 \\ +6 \\ \hline \end{array}$$



$$\begin{array}{r} 9 \\ +4 \\ \hline \end{array}$$



$$\begin{array}{r} 1 \\ +4 \\ \hline \end{array}$$



$$\begin{array}{r} 9 \\ +6 \\ \hline \end{array}$$




Through the Dark Forest (H) Answers


Find each sum to find your way through the forest.




$$\begin{array}{r} 5 \\ +4 \\ \hline 9 \end{array}$$



$$\begin{array}{r} 6 \\ +9 \\ \hline 15 \end{array}$$



$$\begin{array}{r} 6 \\ +7 \\ \hline 13 \end{array}$$
$$\begin{array}{r} 9 \\ +6 \\ \hline 15 \end{array}$$



$$\begin{array}{r} 4 \\ +7 \\ \hline 11 \end{array}$$



$$\begin{array}{r} 1 \\ +4 \\ \hline 5 \end{array}$$



$$\begin{array}{r} 2 \\ +3 \\ \hline 5 \end{array}$$



$$\begin{array}{r} 7 \\ +7 \\ \hline 14 \end{array}$$



$$\begin{array}{r} 5 \\ +9 \\ \hline 14 \end{array}$$



$$\begin{array}{r} 5 \\ +2 \\ \hline 7 \end{array}$$



$$\begin{array}{r} 9 \\ +7 \\ \hline 16 \end{array}$$



$$\begin{array}{r} 6 \\ +4 \\ \hline 10 \end{array}$$



$$\begin{array}{r} 7 \\ +6 \\ \hline 13 \end{array}$$



$$\begin{array}{r} 9 \\ +9 \\ \hline 18 \end{array}$$



$$\begin{array}{r} 9 \\ +4 \\ \hline 13 \end{array}$$



$$\begin{array}{r} 4 \\ +5 \\ \hline 9 \end{array}$$



$$\begin{array}{r} 7 \\ +9 \\ \hline 16 \end{array}$$



$$\begin{array}{r} 8 \\ +3 \\ \hline 11 \end{array}$$



$$\begin{array}{r} 9 \\ +4 \\ \hline 13 \end{array}$$



$$\begin{array}{r} 4 \\ +7 \\ \hline 11 \end{array}$$

$$\begin{array}{r} 7 \\ +5 \\ \hline 12 \end{array}$$



$$\begin{array}{r} 8 \\ +6 \\ \hline 14 \end{array}$$



$$\begin{array}{r} 9 \\ +4 \\ \hline 13 \end{array}$$



$$\begin{array}{r} 1 \\ +4 \\ \hline 5 \end{array}$$

$$\begin{array}{r} 9 \\ +6 \\ \hline 15 \end{array}$$



Through the Dark Forest (I)

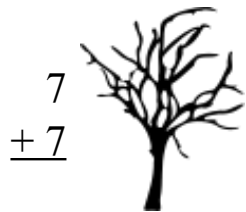
Find each sum to find your way through the forest.



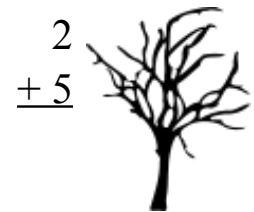
$$\begin{array}{r} 7 \\ +3 \\ \hline \end{array}$$



$$\begin{array}{r} 9 \\ +8 \\ \hline \end{array}$$



$$\begin{array}{r} 7 \\ +7 \\ \hline \end{array}$$



$$\begin{array}{r} 2 \\ +5 \\ \hline \end{array}$$

$$\begin{array}{r} 8 \\ +4 \\ \hline \end{array}$$



$$\begin{array}{r} 9 \\ +8 \\ \hline \end{array}$$



$$\begin{array}{r} 4 \\ +7 \\ \hline \end{array}$$



$$\begin{array}{r} 4 \\ +4 \\ \hline \end{array}$$



$$\begin{array}{r} 8 \\ +8 \\ \hline \end{array}$$



$$\begin{array}{r} 6 \\ +2 \\ \hline \end{array}$$



$$\begin{array}{r} 1 \\ +5 \\ \hline \end{array}$$



$$\begin{array}{r} 7 \\ +2 \\ \hline \end{array}$$



$$\begin{array}{r} 1 \\ +7 \\ \hline \end{array}$$



$$\begin{array}{r} 7 \\ +6 \\ \hline \end{array}$$



$$\begin{array}{r} 8 \\ +8 \\ \hline \end{array}$$



$$\begin{array}{r} 2 \\ +7 \\ \hline \end{array}$$



$$\begin{array}{r} 7 \\ +6 \\ \hline \end{array}$$



$$\begin{array}{r} 7 \\ +7 \\ \hline \end{array}$$



$$\begin{array}{r} 3 \\ +6 \\ \hline \end{array}$$



$$\begin{array}{r} 4 \\ +1 \\ \hline \end{array}$$

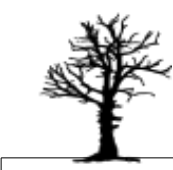
$$\begin{array}{r} 7 \\ +6 \\ \hline \end{array}$$



$$\begin{array}{r} 4 \\ +6 \\ \hline \end{array}$$



$$\begin{array}{r} 4 \\ +5 \\ \hline \end{array}$$



$$\begin{array}{r} 5 \\ +3 \\ \hline \end{array}$$



$$\begin{array}{r} 8 \\ +9 \\ \hline \end{array}$$

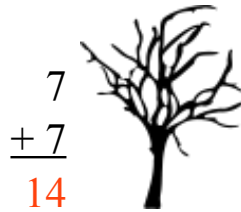


Through the Dark Forest (I) Answers

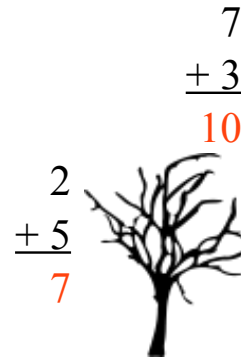
Find each sum to find your way through the forest.




$$\begin{array}{r} 9 \\ +8 \\ \hline 17 \end{array}$$



$$\begin{array}{r} 7 \\ +7 \\ \hline 14 \end{array}$$



$$\begin{array}{r} 7 \\ +3 \\ \hline 10 \end{array}$$
$$\begin{array}{r} 2 \\ +5 \\ \hline 7 \end{array}$$



$$\begin{array}{r} 8 \\ +4 \\ \hline 12 \end{array}$$



$$\begin{array}{r} 9 \\ +8 \\ \hline 17 \end{array}$$



$$\begin{array}{r} 4 \\ +7 \\ \hline 11 \end{array}$$



$$\begin{array}{r} 4 \\ +4 \\ \hline 8 \end{array}$$



$$\begin{array}{r} 8 \\ +8 \\ \hline 16 \end{array}$$



$$\begin{array}{r} 6 \\ +2 \\ \hline 8 \end{array}$$



$$\begin{array}{r} 1 \\ +5 \\ \hline 6 \end{array}$$



$$\begin{array}{r} 7 \\ +2 \\ \hline 9 \end{array}$$



$$\begin{array}{r} 1 \\ +7 \\ \hline 8 \end{array}$$



$$\begin{array}{r} 7 \\ +6 \\ \hline 13 \end{array}$$



$$\begin{array}{r} 8 \\ +8 \\ \hline 16 \end{array}$$



$$\begin{array}{r} 2 \\ +7 \\ \hline 9 \end{array}$$



$$\begin{array}{r} 7 \\ +6 \\ \hline 13 \end{array}$$



$$\begin{array}{r} 7 \\ +7 \\ \hline 14 \end{array}$$



$$\begin{array}{r} 3 \\ +6 \\ \hline 9 \end{array}$$



$$\begin{array}{r} 4 \\ +1 \\ \hline 5 \end{array}$$

$$\begin{array}{r} 7 \\ +6 \\ \hline 13 \end{array}$$



$$\begin{array}{r} 4 \\ +6 \\ \hline 10 \end{array}$$



$$\begin{array}{r} 4 \\ +5 \\ \hline 9 \end{array}$$




$$\begin{array}{r} 5 \\ +3 \\ \hline 8 \end{array}$$

$$\begin{array}{r} 8 \\ +9 \\ \hline 17 \end{array}$$



Through the Dark Forest (J)

Find each sum to find your way through the forest.



$$\begin{array}{r} 4 \\ +1 \\ \hline \end{array}$$

$$\begin{array}{r} 3 \\ +7 \\ \hline \end{array}$$

$$\begin{array}{r} 9 \\ +3 \\ \hline \end{array}$$



$$\begin{array}{r} 3 \\ +6 \\ \hline \end{array}$$



$$\begin{array}{r} 5 \\ +6 \\ \hline \end{array}$$



$$\begin{array}{r} 2 \\ +7 \\ \hline \end{array}$$



$$\begin{array}{r} 2 \\ +1 \\ \hline \end{array}$$



$$\begin{array}{r} 5 \\ +1 \\ \hline \end{array}$$



$$\begin{array}{r} 1 \\ +1 \\ \hline \end{array}$$



$$\begin{array}{r} 2 \\ +5 \\ \hline \end{array}$$

$$\begin{array}{r} 9 \\ +2 \\ \hline \end{array}$$

$$\begin{array}{r} 5 \\ +5 \\ \hline \end{array}$$



$$\begin{array}{r} 5 \\ +3 \\ \hline \end{array}$$



$$\begin{array}{r} 5 \\ +1 \\ \hline \end{array}$$



$$\begin{array}{r} 2 \\ +9 \\ \hline \end{array}$$



$$\begin{array}{r} 3 \\ +2 \\ \hline \end{array}$$



$$\begin{array}{r} 5 \\ +7 \\ \hline \end{array}$$



$$\begin{array}{r} 6 \\ +3 \\ \hline \end{array}$$

$$\begin{array}{r} 7 \\ +4 \\ \hline \end{array}$$



$$\begin{array}{r} 7 \\ +1 \\ \hline \end{array}$$

$$\begin{array}{r} 6 \\ +6 \\ \hline \end{array}$$



$$\begin{array}{r} 8 \\ +4 \\ \hline \end{array}$$



$$\begin{array}{r} 4 \\ +3 \\ \hline \end{array}$$



$$\begin{array}{r} 1 \\ +5 \\ \hline \end{array}$$




Through the Dark Forest (J) Answers


Find each sum to find your way through the forest.




$$\begin{array}{r} 4 \\ +1 \\ \hline 5 \end{array}$$



$$\begin{array}{r} 3 \\ +7 \\ \hline 10 \end{array}$$



$$\begin{array}{r} 9 \\ +3 \\ \hline 12 \end{array}$$



$$\begin{array}{r} 5 \\ +6 \\ \hline 11 \end{array}$$



$$\begin{array}{r} 2 \\ +7 \\ \hline 9 \end{array}$$



$$\begin{array}{r} 2 \\ +1 \\ \hline 3 \end{array}$$



$$\begin{array}{r} 5 \\ +1 \\ \hline 6 \end{array}$$



$$\begin{array}{r} 1 \\ +1 \\ \hline 2 \end{array}$$



$$\begin{array}{r} 2 \\ +5 \\ \hline 7 \end{array}$$

$$\begin{array}{r} 9 \\ +2 \\ \hline 11 \end{array}$$

$$\begin{array}{r} 5 \\ +5 \\ \hline 10 \end{array}$$



$$\begin{array}{r} 5 \\ +3 \\ \hline 8 \end{array}$$



$$\begin{array}{r} 5 \\ +1 \\ \hline 6 \end{array}$$



$$\begin{array}{r} 3 \\ +2 \\ \hline 5 \end{array}$$



$$\begin{array}{r} 5 \\ +7 \\ \hline 12 \end{array}$$



$$\begin{array}{r} 5 \\ +1 \\ \hline 6 \end{array}$$

$$\begin{array}{r} 2 \\ +9 \\ \hline 11 \end{array}$$



$$\begin{array}{r} 6 \\ +6 \\ \hline 12 \end{array}$$



$$\begin{array}{r} 7 \\ +1 \\ \hline 8 \end{array}$$



$$\begin{array}{r} 6 \\ +3 \\ \hline 9 \end{array}$$

$$\begin{array}{r} 7 \\ +4 \\ \hline 11 \end{array}$$



$$\begin{array}{r} 6 \\ +6 \\ \hline 12 \end{array}$$



$$\begin{array}{r} 8 \\ +4 \\ \hline 12 \end{array}$$



$$\begin{array}{r} 4 \\ +3 \\ \hline 7 \end{array}$$

$$\begin{array}{r} 1 \\ +5 \\ \hline 6 \end{array}$$

