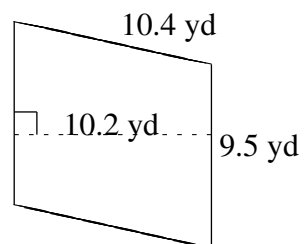
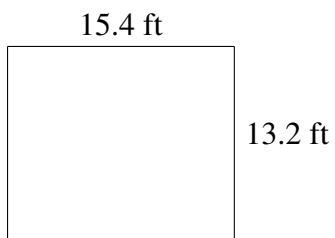
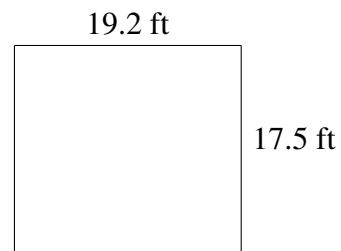
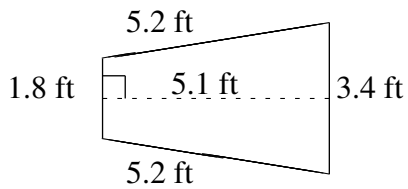
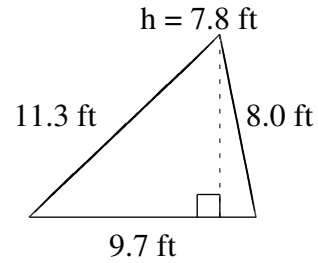
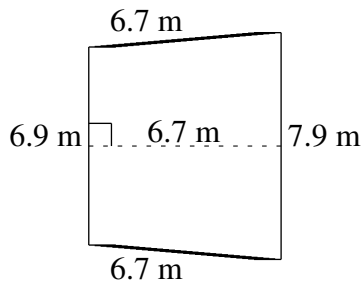


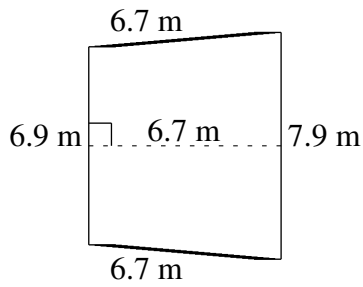
# Area and Perimeter of Various Shapes (A)

Find the area and perimeter of each shape.



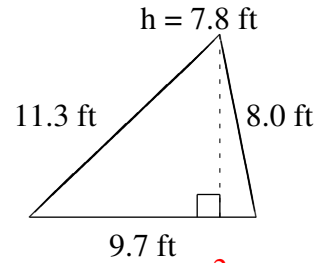
# Area and Perimeter of Various Shapes (A) Answers

Find the area and perimeter of each shape.



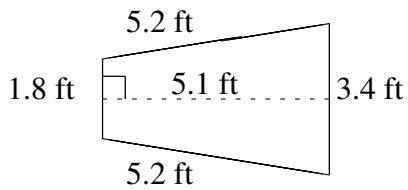
$$A = 49.58 \text{ m}^2$$

$$P = 28.2 \text{ m}$$



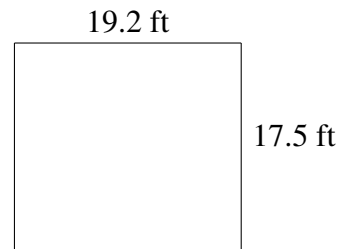
$$A = 37.83 \text{ ft}^2$$

$$P = 29.0 \text{ ft}$$



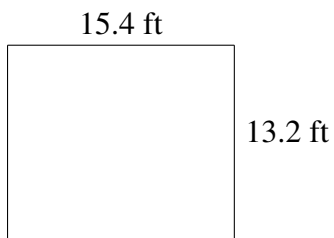
$$A = 13.26 \text{ ft}^2$$

$$P = 15.6 \text{ ft}$$



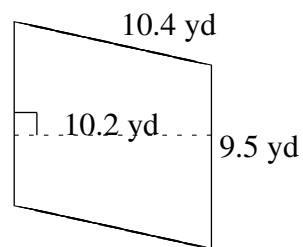
$$A = 336.00 \text{ ft}^2$$

$$P = 73.4 \text{ ft}$$



$$A = 203.28 \text{ ft}^2$$

$$P = 57.2 \text{ ft}$$



$$A = 96.90 \text{ yd}^2$$

$$P = 39.8 \text{ yd}$$