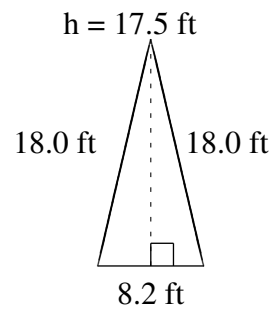
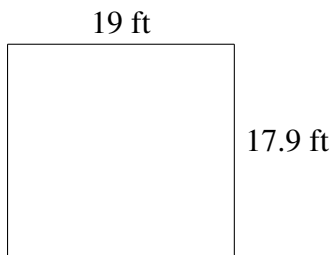
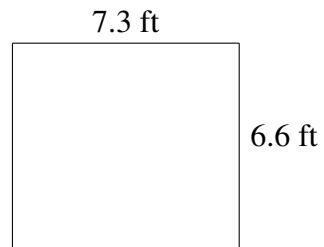
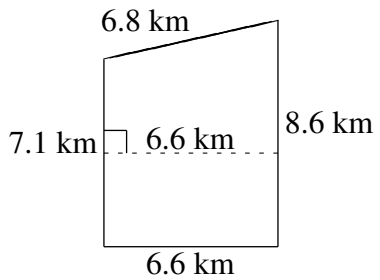
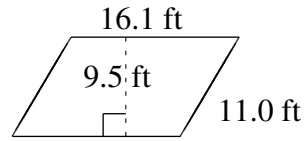
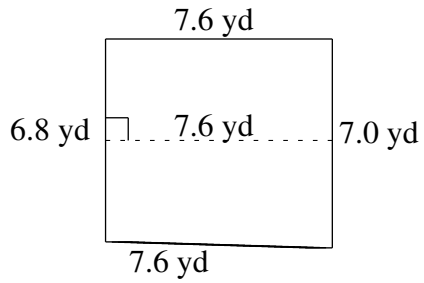


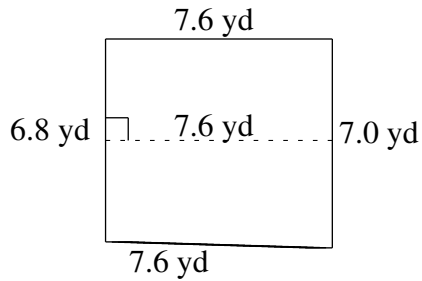
Area and Perimeter of Various Shapes (C)

Find the area and perimeter of each shape.



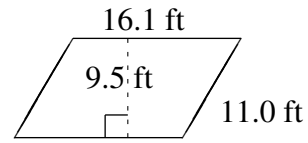
Area and Perimeter of Various Shapes (C) Answers

Find the area and perimeter of each shape.



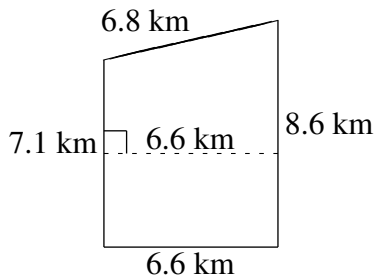
$$A = 52.44 \text{ yd}^2$$

$$P = 29.0 \text{ yd}$$



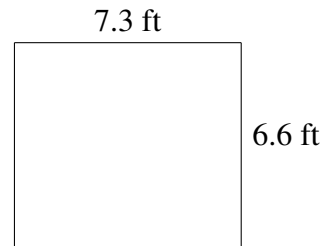
$$A = 152.95 \text{ ft}^2$$

$$P = 54.2 \text{ ft}$$



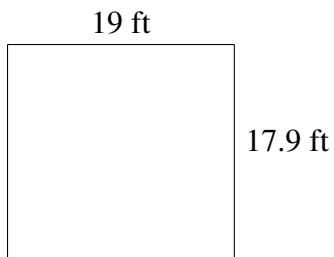
$$A = 51.81 \text{ km}^2$$

$$P = 29.1 \text{ km}$$



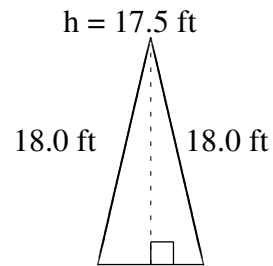
$$A = 48.18 \text{ ft}^2$$

$$P = 27.8 \text{ ft}$$



$$A = 340.1 \text{ ft}^2$$

$$P = 73.8 \text{ ft}$$



$$A = 71.75 \text{ ft}^2$$

$$P = 44.2 \text{ ft}$$