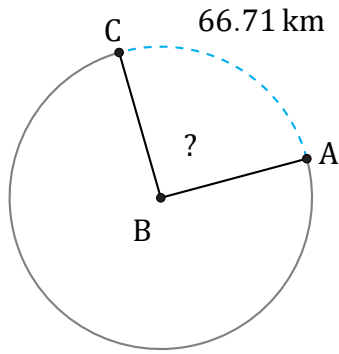


Arc Angles (C)

Name: _____

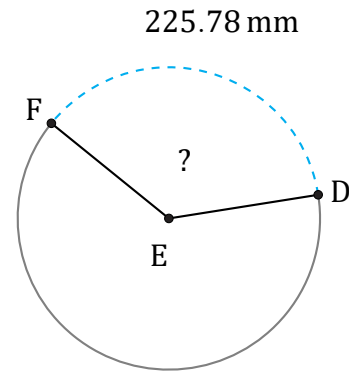
Date: _____

Calculate each arc angle measurement.



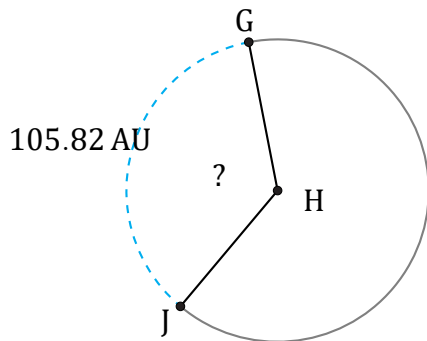
Radius = 42 km

$\angle ABC =$



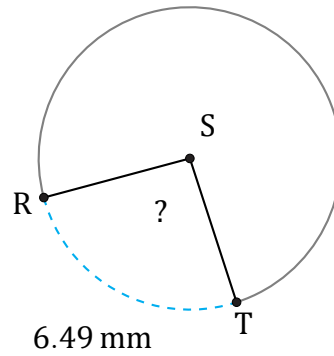
Diameter = 196 mm

$\angle DEF =$



Diameter = 94 AU

$\angle GHJ =$



Circumference = 25.13 mm

$\angle RST =$