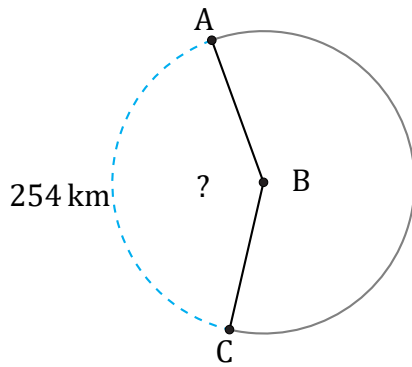


Arc Angles (D)

Name: _____

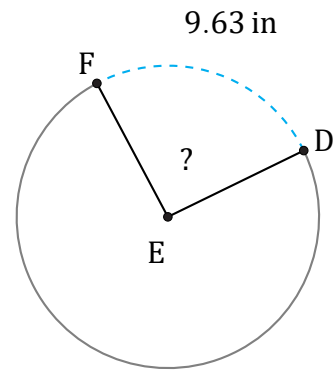
Date: _____

Calculate each arc angle measurement.



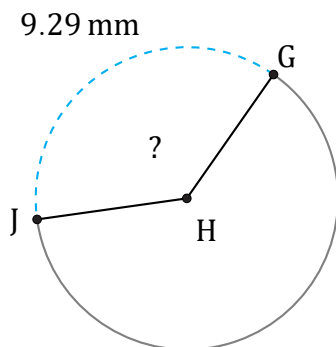
Diameter = 198 km

$\angle ABC =$



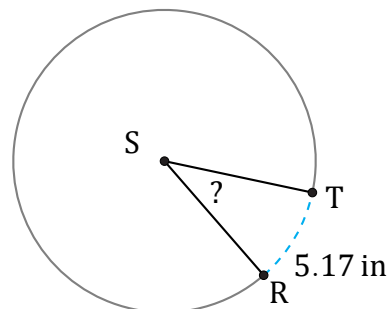
Radius = 6 in

$\angle DEF =$



Diameter = 8 mm

$\angle GHJ =$



Circumference = 50.27 in

$\angle RST =$