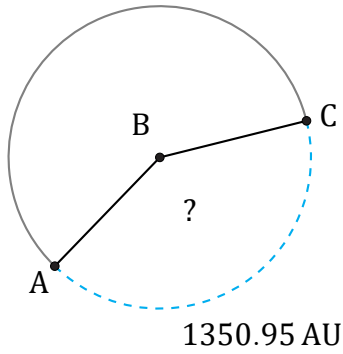


# Arc Angles (F)

Name: \_\_\_\_\_

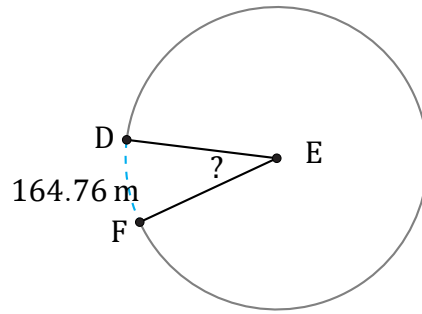
Date: \_\_\_\_\_

Calculate each arc angle measurement.



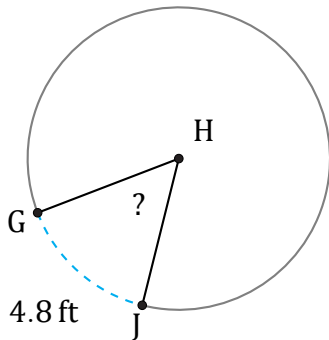
Circumference = 3286.11 AU

$\angle ABC =$



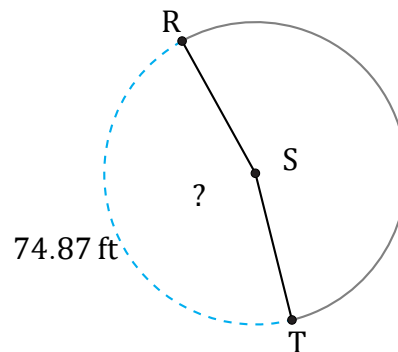
Circumference = 1853.54 m

$\angle DEF =$



Radius = 5 ft

$\angle GHJ =$



Diameter = 52 ft

$\angle RST =$