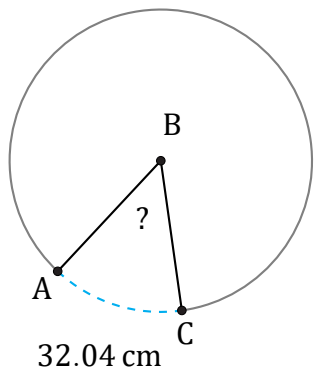


Arc Angles (G)

Name: _____

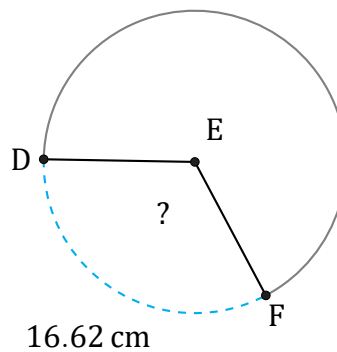
Date: _____

Calculate each arc angle measurement.



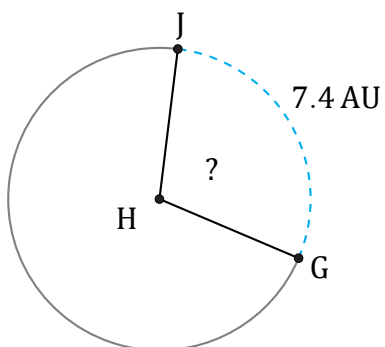
Circumference = 226.19 cm

$\angle ABC =$



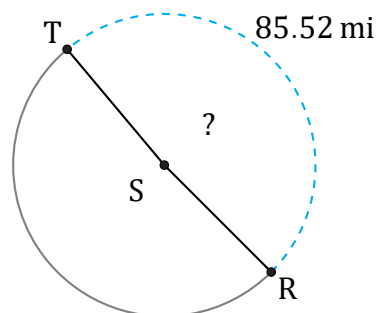
Radius = 8 cm

$\angle DEF =$



Radius = 4 AU

$\angle GHJ =$



Diameter = 56 mi

$\angle RST =$