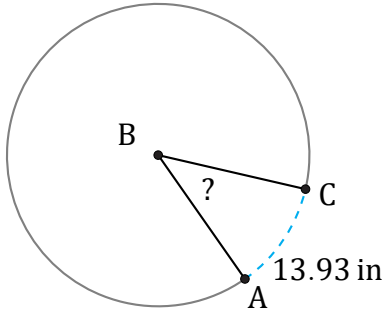


Arc Angles (E)

Name: _____

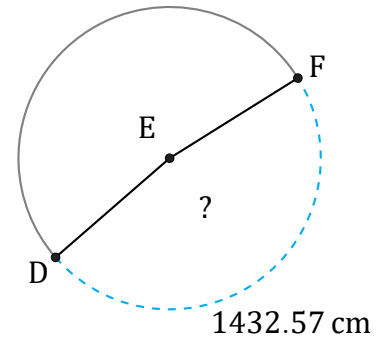
Date: _____

Calculate each arc angle measurement.



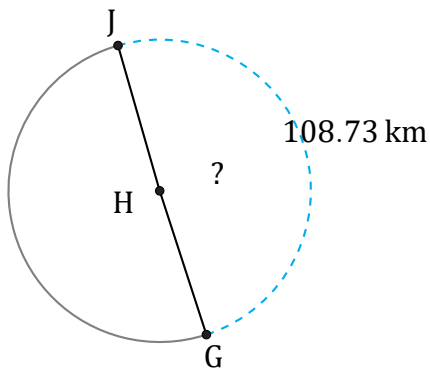
Circumference = 119.38 in

$\angle ABC =$



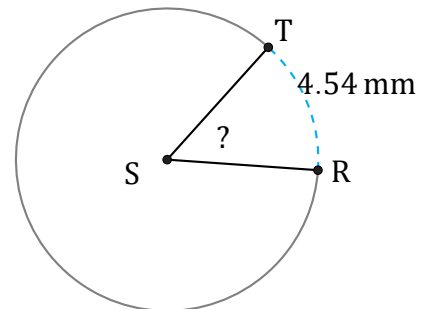
Circumference = 3015.93 cm

$\angle DEF =$



Circumference = 219.91 km

$\angle GHJ =$



Circumference = 31.42 mm

$\angle RST =$