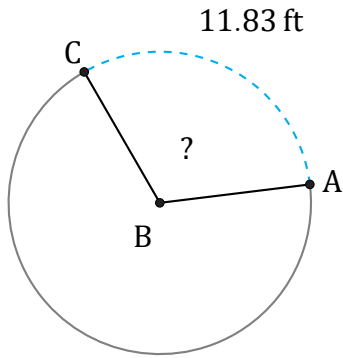


Arc Angles (J)

Name: _____

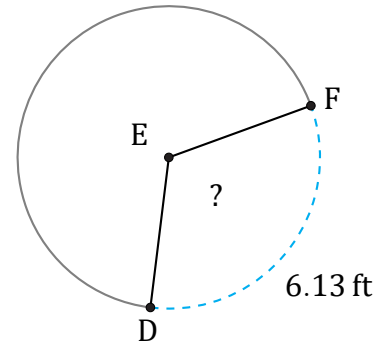
Date: _____

Calculate each arc angle measurement.



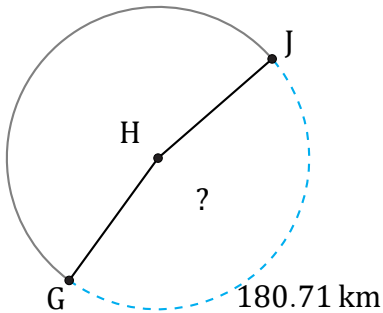
Circumference = 37.7 ft

$\angle ABC =$



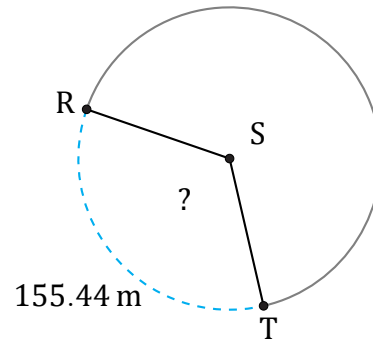
Circumference = 18.85 ft

$\angle DEF =$



Circumference = 389.56 km

$\angle GHJ =$



Circumference = 458.67 m

$\angle RST =$