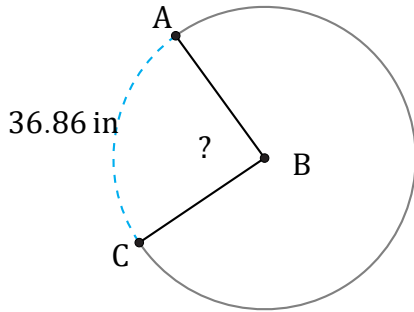


Arc Angles (H)

Name: _____

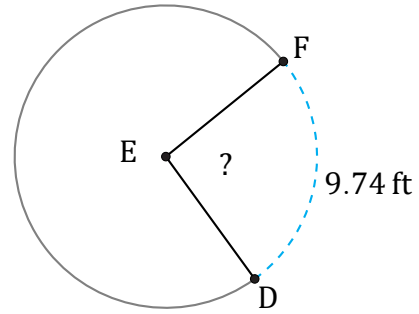
Date: _____

Calculate each arc angle measurement.



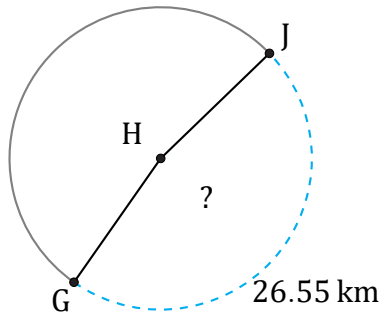
Radius = 24 in

$\angle ABC =$



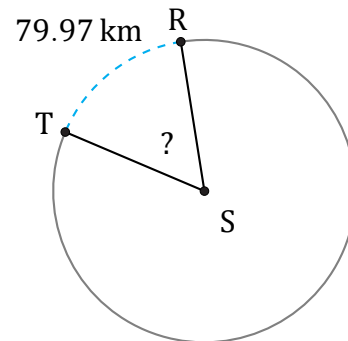
Diameter = 12 ft

$\angle DEF =$



Radius = 9 km

$\angle GHJ =$



Diameter = 158 km

$\angle RST =$