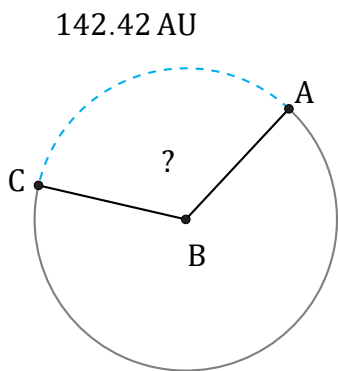


Arc Angles (J)

Name: _____

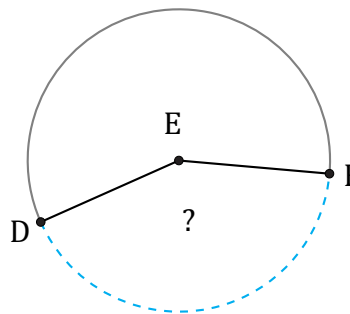
Date: _____

Calculate each arc angle measurement.



Radius = 68 AU

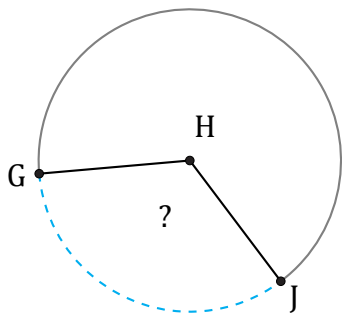
$\angle ABC =$



86.97 in

Radius = 33 in

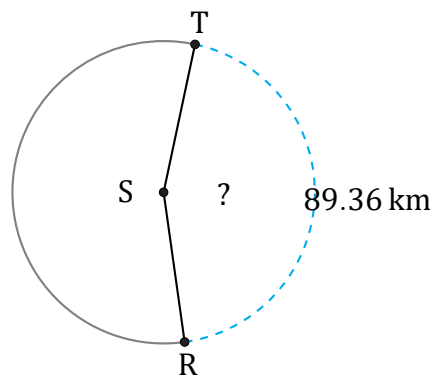
$\angle DEF =$



125.63 cm

Diameter = 118 cm

$\angle GHJ =$



89.36 km

Diameter = 64 km

$\angle RST =$