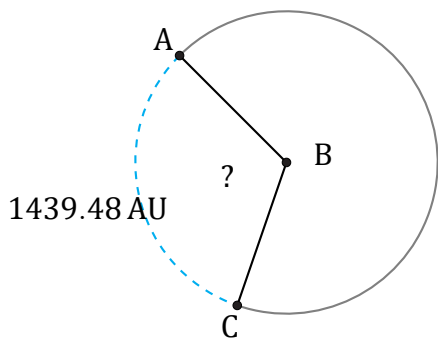


Arc Angles (A)

Name: _____

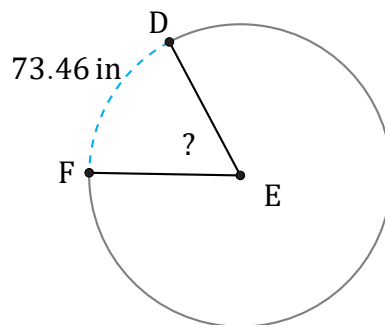
Date: _____

Calculate each arc angle measurement.



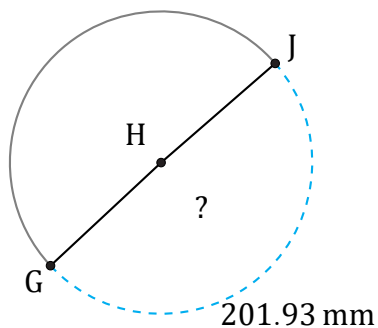
Radius = 711 AU

$\angle ABC =$



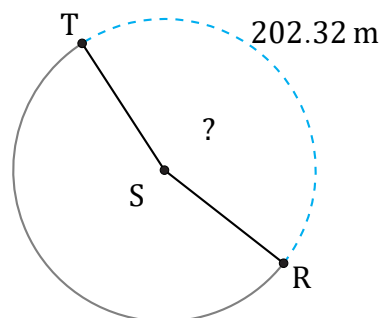
Radius = 69 in

$\angle DEF =$



Radius = 65 mm

$\angle GHJ =$



Radius = 72 m

$\angle RST =$