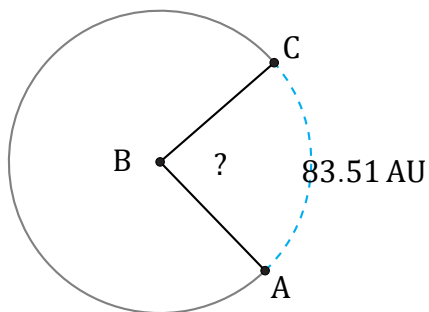


Arc Angles (B)

Name: _____

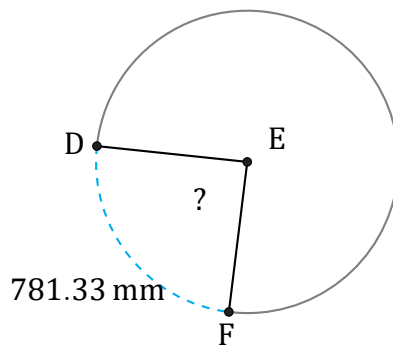
Date: _____

Calculate each arc angle measurement.



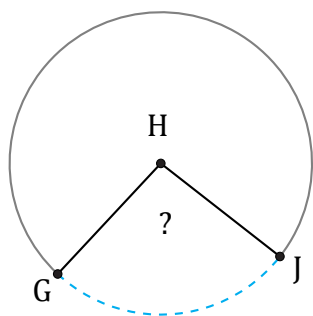
Radius = 55 AU

$\angle ABC =$



Radius = 503 mm

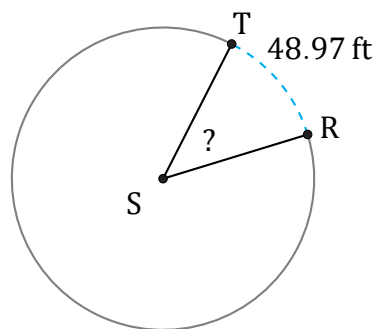
$\angle DEF =$



102.8 mi

Radius = 62 mi

$\angle GHJ =$



Radius = 61 ft

$\angle RST =$