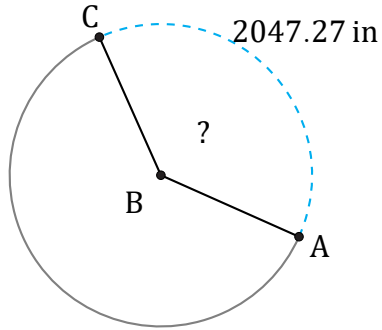


Arc Angles (E)

Name: _____

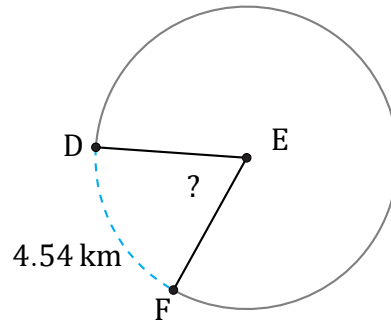
Date: _____

Calculate each arc angle measurement.



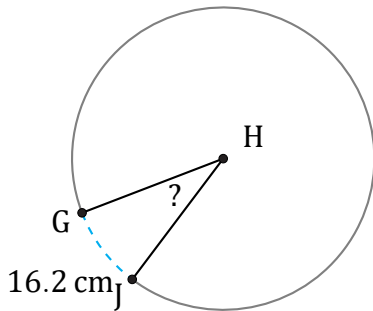
Radius = 850 in

$\angle ABC =$



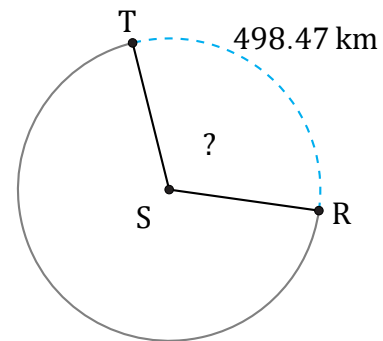
Radius = 4 km

$\angle DEF =$



Radius = 29 cm

$\angle GHJ =$



Radius = 255 km

$\angle RST =$