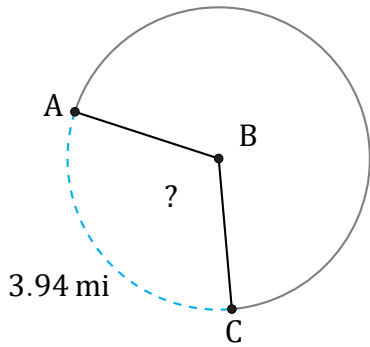


Arc Angles (H)

Name: _____

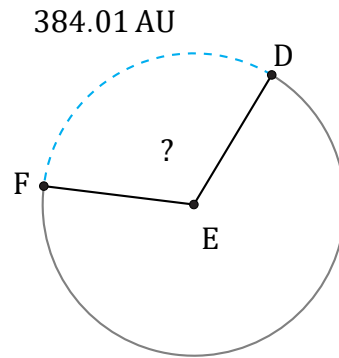
Date: _____

Calculate each arc angle measurement.



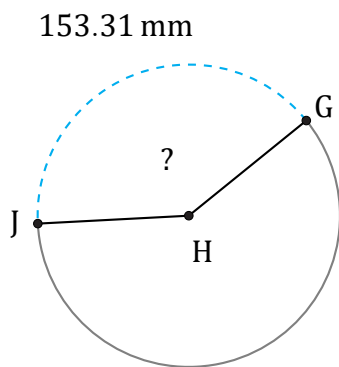
Radius = 2 mi

$\angle ABC =$



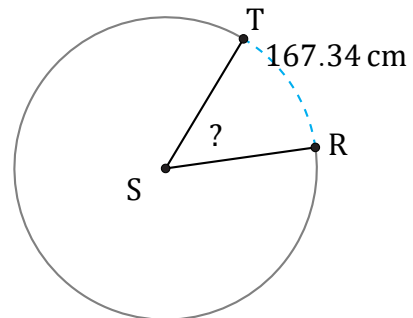
Radius = 193 AU

$\angle DEF =$



Radius = 61 mm

$\angle GHJ =$



Radius = 188 cm

$\angle RST =$