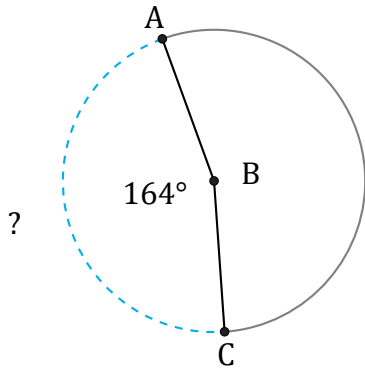


Arc Length (A)

Name: _____

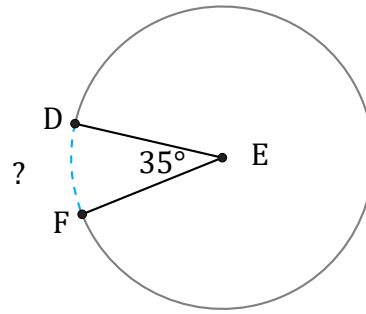
Date: _____

Calculate each arc length.



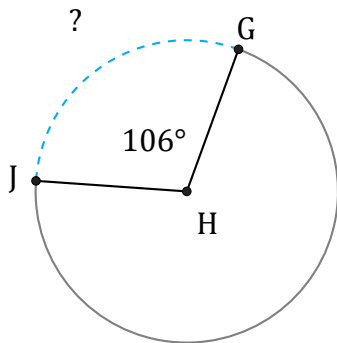
Diameter = 4 ft

$\widehat{AC} =$



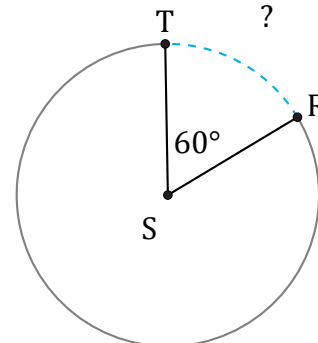
Circumference = 295.31 ft

$\widehat{DF} =$



Circumference = 515.22 mi

$\widehat{GJ} =$



Radius = 6 mm

$\widehat{RT} =$