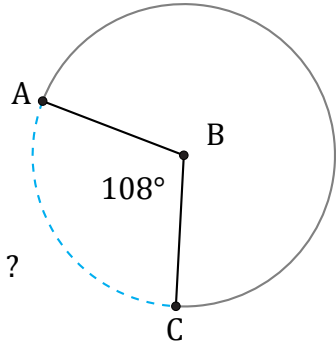


Arc Length (J)

Name: _____

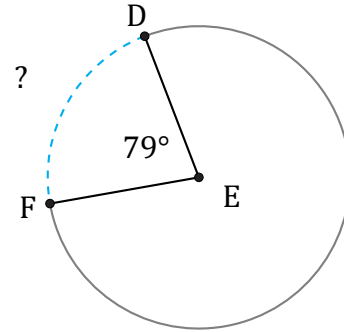
Date: _____

Calculate each arc length.



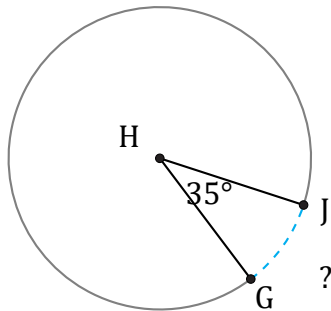
Diameter = 310 m

$\widehat{AC} =$



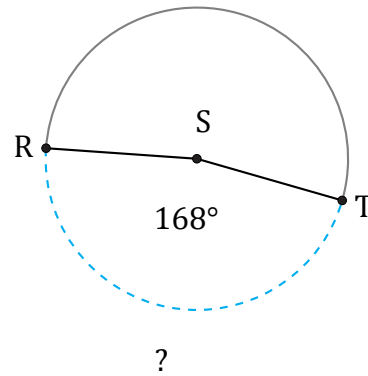
Circumference = 194.78 km

$\widehat{DF} =$



Circumference = 188.5 in

$\widehat{GJ} =$



Radius = 54 mm

$\widehat{RT} =$