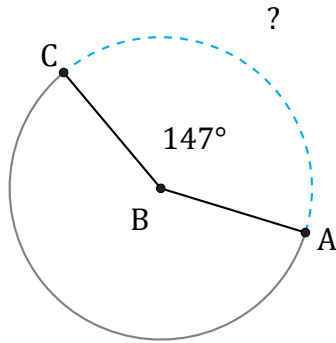


# Arc Length (A)

Name: \_\_\_\_\_

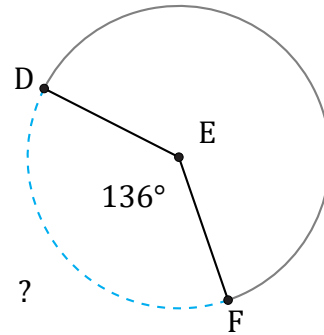
Date: \_\_\_\_\_

Calculate each arc length.



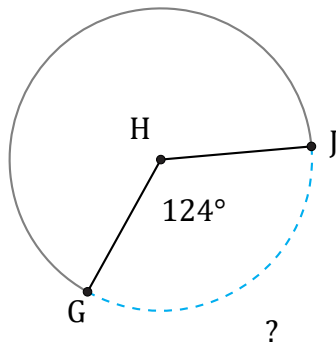
Circumference = 6232.92 in

$\widehat{AC} =$



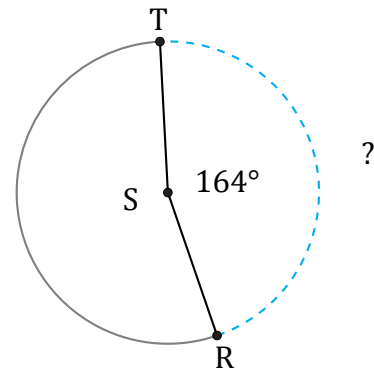
Circumference = 408.41 km

$\widehat{DF} =$



Circumference = 18.85 mi

$\widehat{GJ} =$



Circumference = 226.19 in

$\widehat{RT} =$