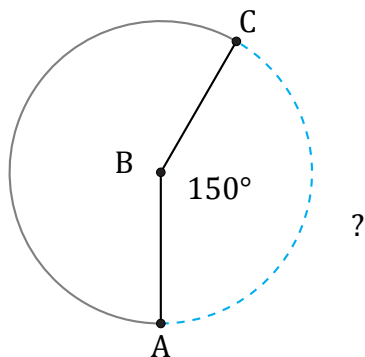


# Arc Length (D)

Name: \_\_\_\_\_

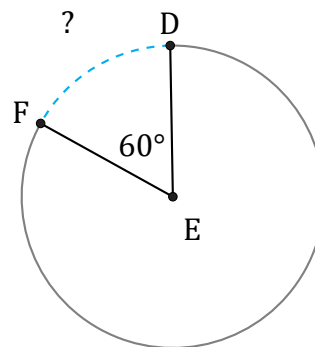
Date: \_\_\_\_\_

Calculate each arc length.



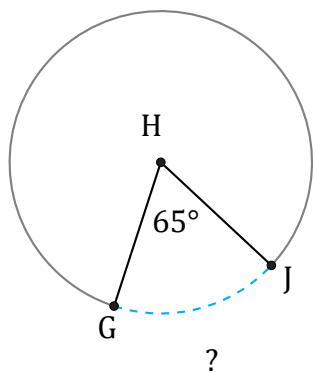
Circumference = 1979.2 in

$\widehat{AC} =$



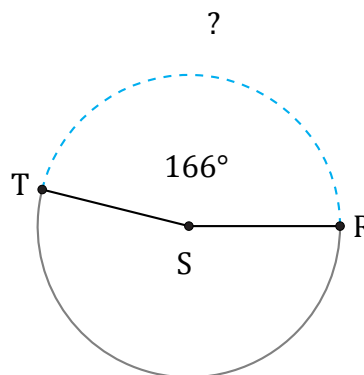
Circumference = 2463.01 km

$\widehat{DF} =$



Circumference = 1363.45 ft

$\widehat{GJ} =$



Circumference = 1614.78 km

$\widehat{RT} =$