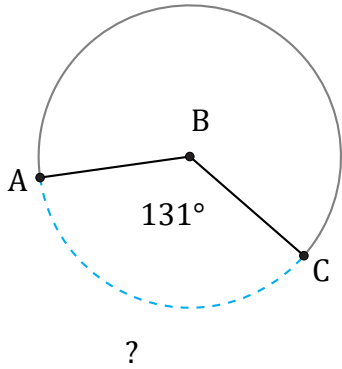


Arc Length (G)

Name: _____

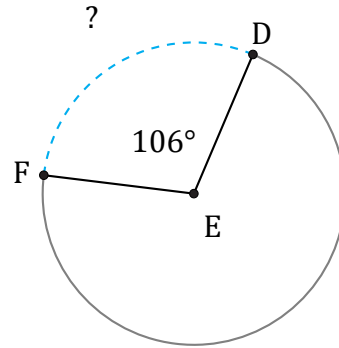
Date: _____

Calculate each arc length.



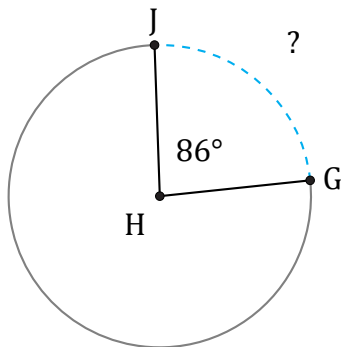
Diameter = 6 cm

$\widehat{AC} =$



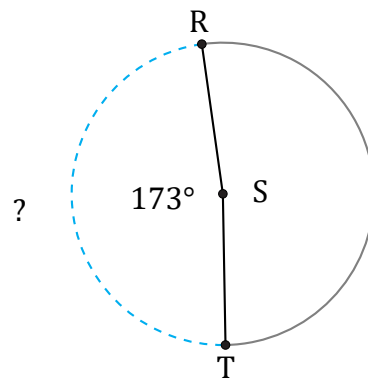
Diameter = 64 m

$\widehat{DF} =$



Diameter = 1294 cm

$\widehat{GJ} =$



Diameter = 650 in

$\widehat{RT} =$