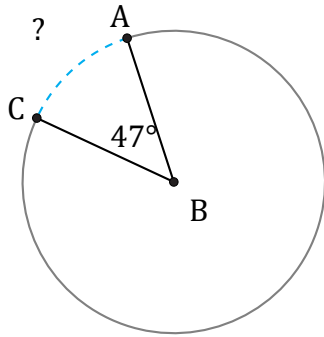


# Arc Length (A)

Name: \_\_\_\_\_

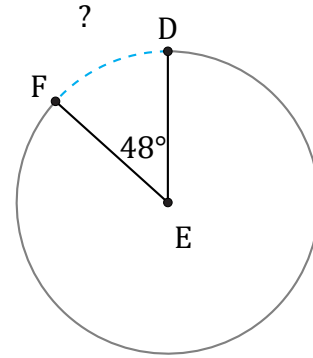
Date: \_\_\_\_\_

Calculate each arc length.



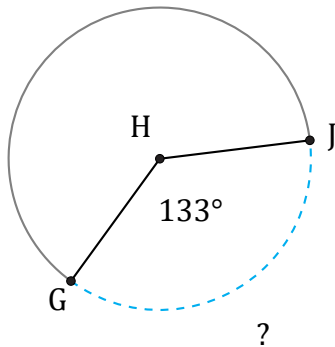
Radius = 399 ft

$\widehat{AC} =$



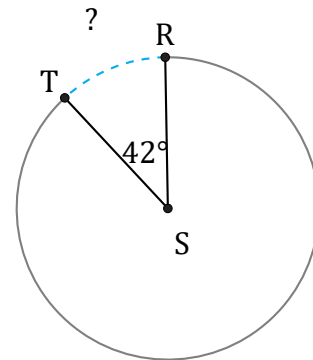
Diameter = 136 AU

$\widehat{DF} =$



Radius = 639 mi

$\widehat{GJ} =$



Diameter = 18 mm

$\widehat{RT} =$