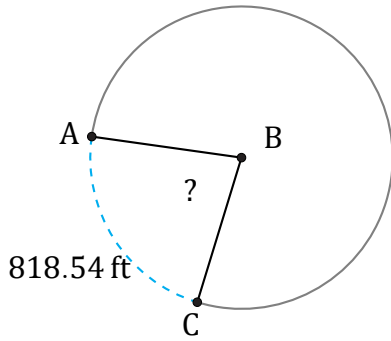


Arc Lengths and Angles (B)

Name: _____

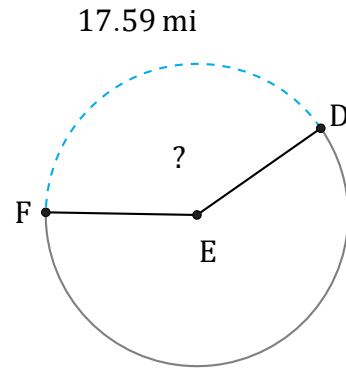
Date: _____

Calculate each arc length or angle measurement.



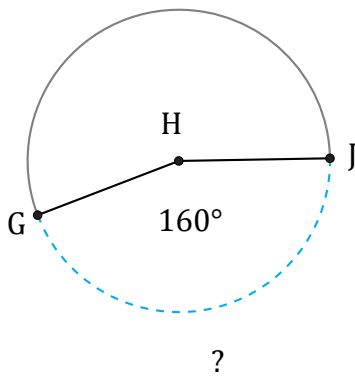
Diameter = 1158 ft

$\angle ABC =$



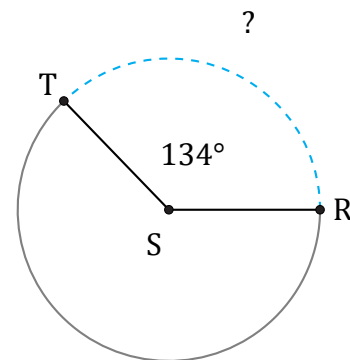
Circumference = 43.98 mi

$\angle DEF =$



Radius = 3 ft

$\widehat{GJ} =$



Circumference = 3166.73 in

$\widehat{RT} =$