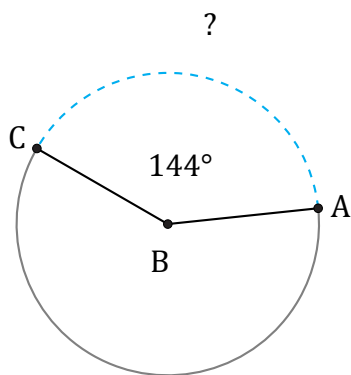


Arc Lengths and Angles (G)

Name: _____

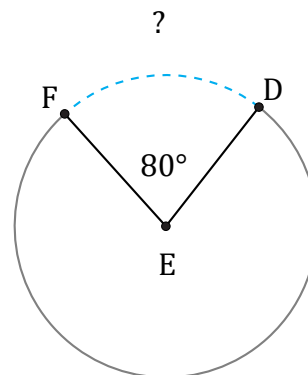
Date: _____

Calculate each arc length or angle measurement.



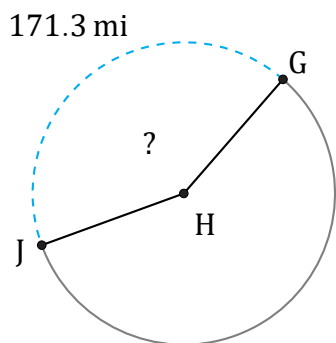
Diameter = 1664 in

$\widehat{AC} =$



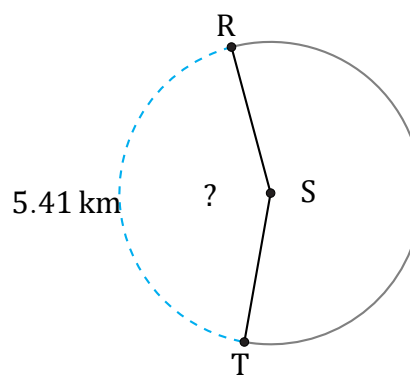
Circumference = 4467.34 AU

$\widehat{DF} =$



Radius = 65 mi

$\angle GHJ =$



Diameter = 4 km

$\angle RST =$