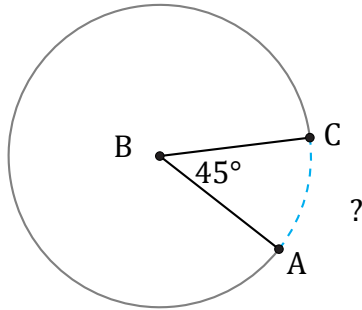


# Arc Lengths and Angles (D)

Name: \_\_\_\_\_

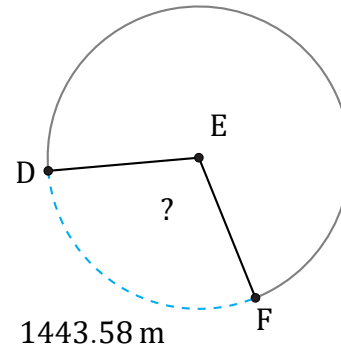
Date: \_\_\_\_\_

Calculate each arc length or angle measurement.



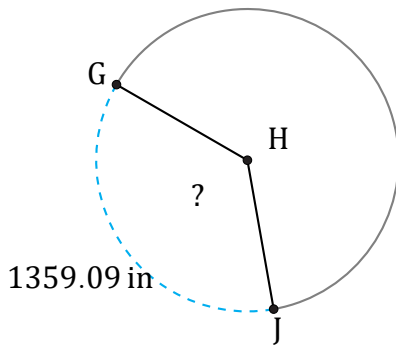
Circumference = 584.34 km

$\widehat{AC} =$



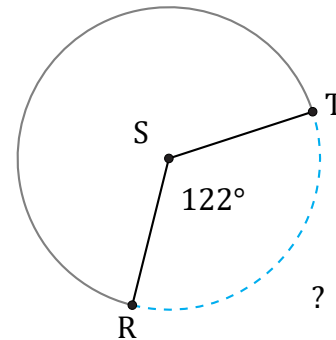
Circumference = 4856.9 m

$\angle DEF =$



Circumference = 3763.63 in

$\angle GHJ =$



Circumference = 452.39 cm

$\widehat{RT} =$