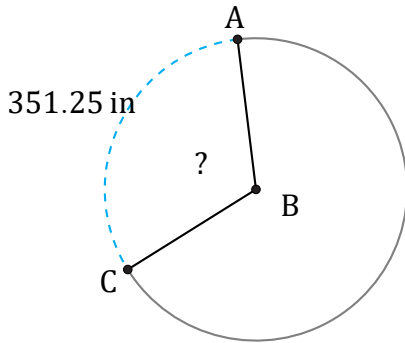


Arc Lengths and Angles (E)

Name: _____

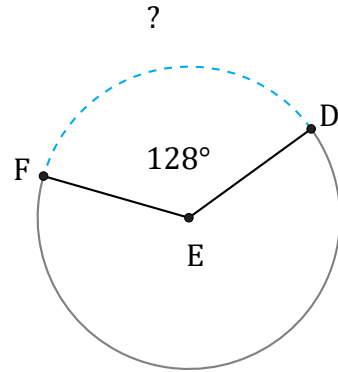
Date: _____

Calculate each arc length or angle measurement.



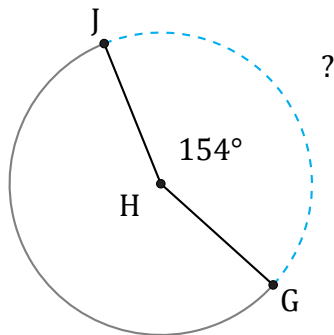
Circumference = 1099.56 in

$\angle ABC =$



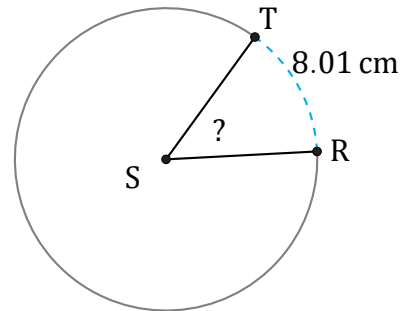
Circumference = 552.92 ft

$\widehat{DF} =$



Circumference = 238.76 ft

$\widehat{GJ} =$



Circumference = 56.55 cm

$\angle RST =$