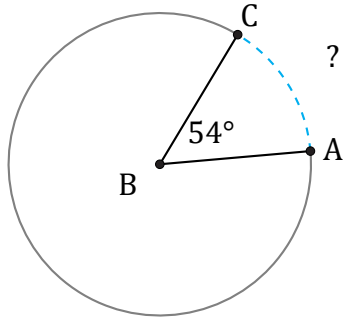


# Arc Lengths and Angles (H)

Name: \_\_\_\_\_

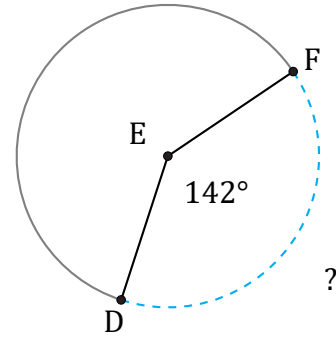
Date: \_\_\_\_\_

Calculate each arc length or angle measurement.



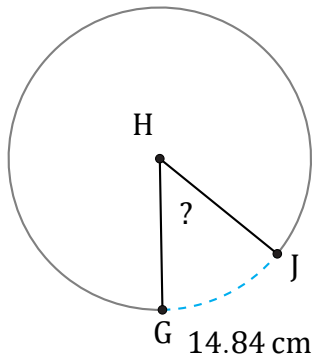
Circumference = 4241.15 cm

$\widehat{AC} =$



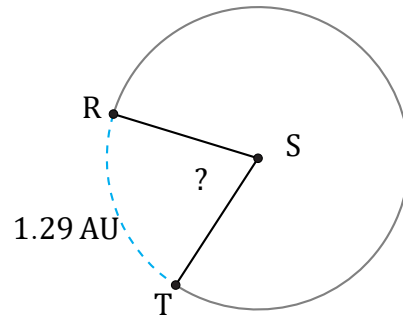
Circumference = 433.54 mm

$\widehat{DF} =$



Circumference = 106.81 cm

$\angle GHJ =$



Circumference = 6.28 AU

$\angle RST =$