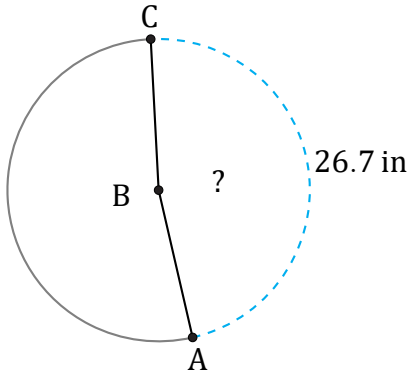


Arc Lengths and Angles (I)

Name: _____

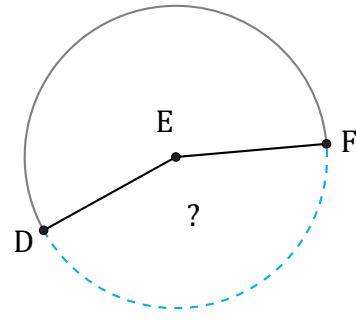
Date: _____

Calculate each arc length or angle measurement.



Circumference = 56.55 in

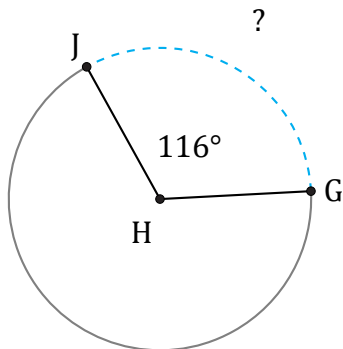
$\angle ABC =$



117.08 in

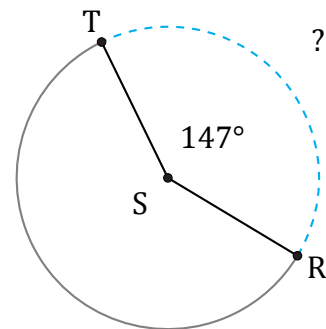
Circumference = 270.18 in

$\angle DEF =$



Circumference = 6.28 km

$\widehat{GJ} =$



Circumference = 5372.12 ft

$\widehat{RT} =$