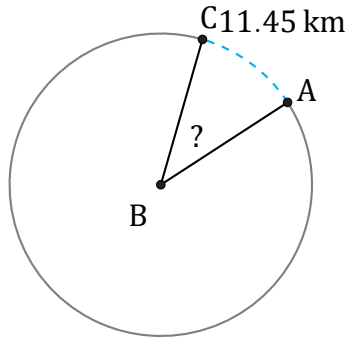


Arc Lengths and Angles (J)

Name: _____

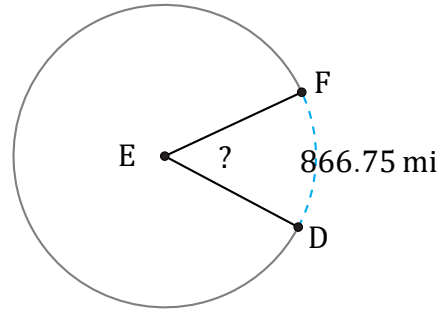
Date: _____

Calculate each arc length or angle measurement.



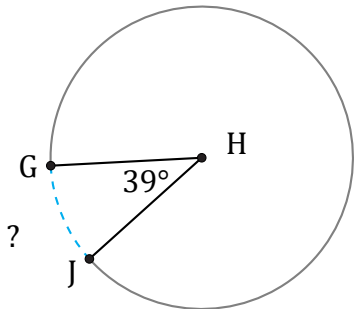
Circumference = 100.53 km

$\angle ABC =$



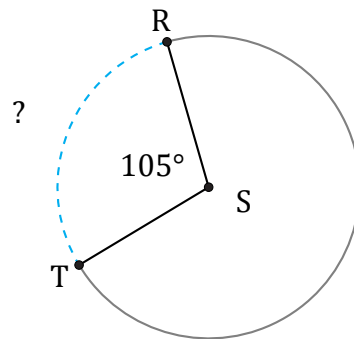
Circumference = 5887.34 mi

$\angle DEF =$



Circumference = 552.92 mi

$\widehat{GJ} =$



Circumference = 37.7 in

$\widehat{RT} =$