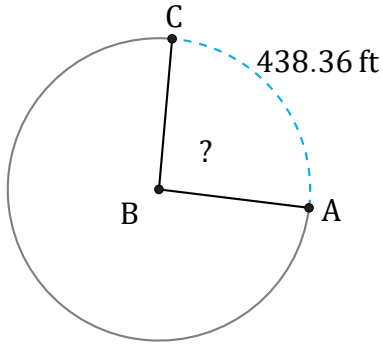


# Arc Lengths and Angles (B)

Name: \_\_\_\_\_

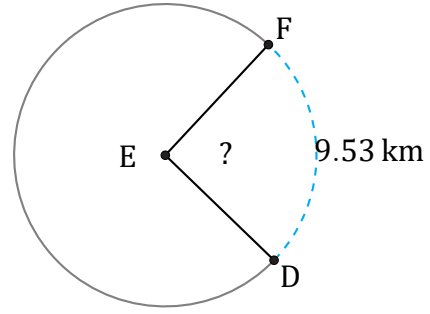
Date: \_\_\_\_\_

Calculate each arc length or angle measurement.



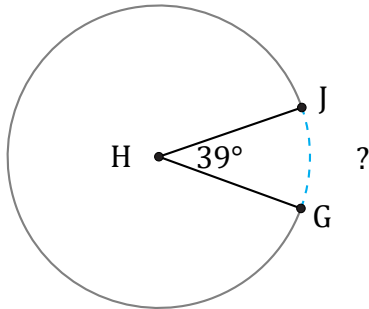
Diameter = 546 ft

$\angle ABC =$



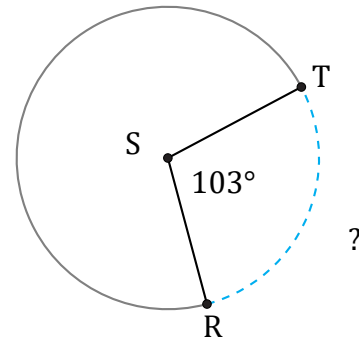
Diameter = 12 km

$\angle DEF =$



Diameter = 8 m

$\widehat{GJ} =$



Diameter = 34 ft

$\widehat{RT} =$