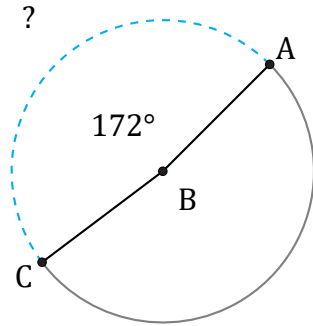


# Arc Lengths and Angles (C)

Name: \_\_\_\_\_

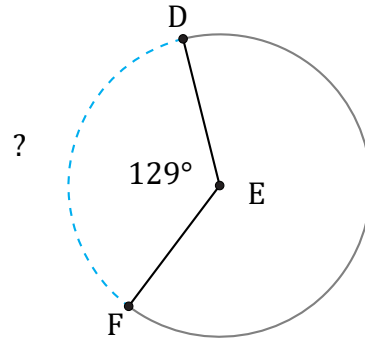
Date: \_\_\_\_\_

Calculate each arc length or angle measurement.



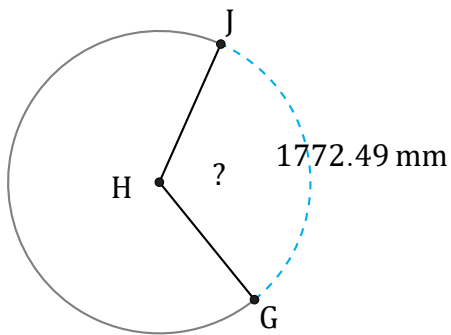
Diameter = 4 cm

$\widehat{AC} =$



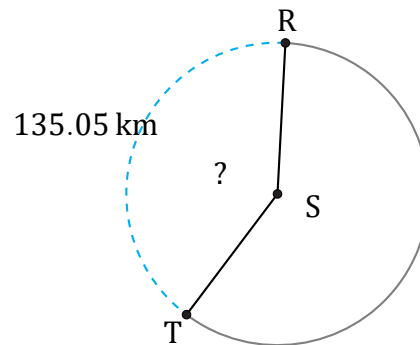
Diameter = 40 in

$\widehat{DF} =$



Diameter = 1736 mm

$\angle GHJ =$



Diameter = 106 km

$\angle RST =$