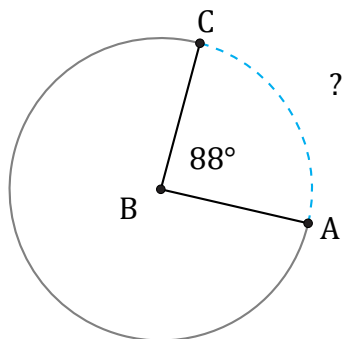


# Arc Lengths and Angles (D)

Name: \_\_\_\_\_

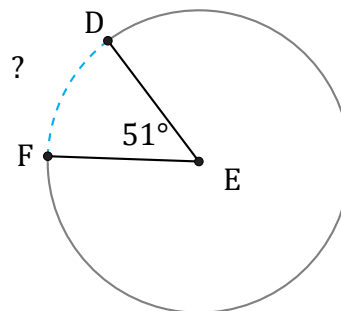
Date: \_\_\_\_\_

Calculate each arc length or angle measurement.



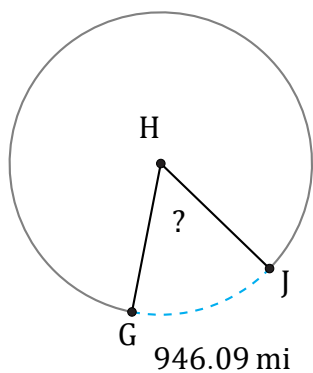
Diameter = 10 AU

$\widehat{AC} =$



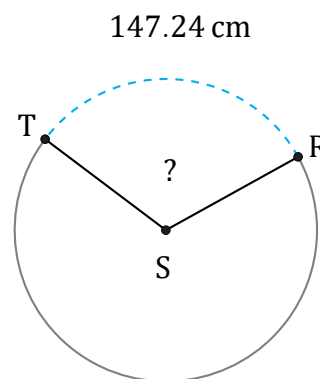
Diameter = 18 in

$\widehat{DF} =$



Diameter = 1902 mi

$\angle GHJ =$



Diameter = 148 cm

$\angle RST =$