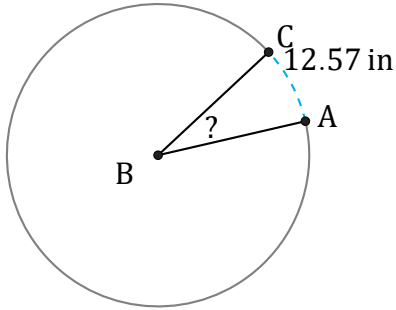


Arc Lengths and Angles (E)

Name: _____

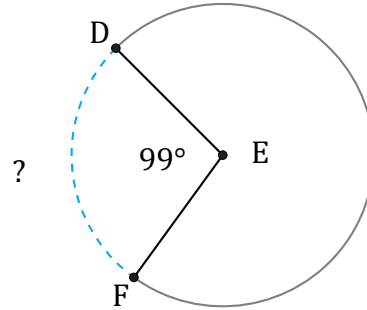
Date: _____

Calculate each arc length or angle measurement.



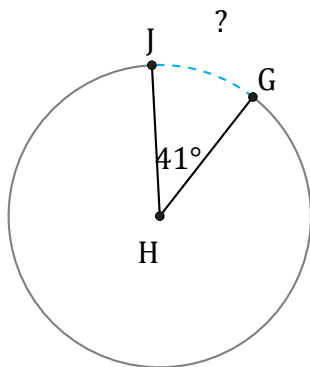
Diameter = 48 in

\widehat{AC} =



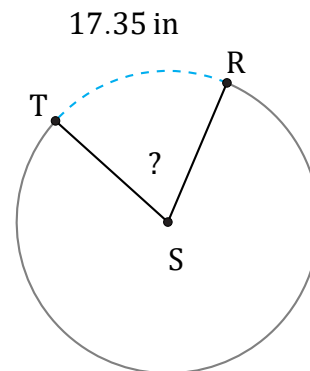
Diameter = 4 AU

\widehat{DF} =



Diameter = 940 cm

\widehat{GJ} =



Diameter = 28 in

$\angle RST$ =