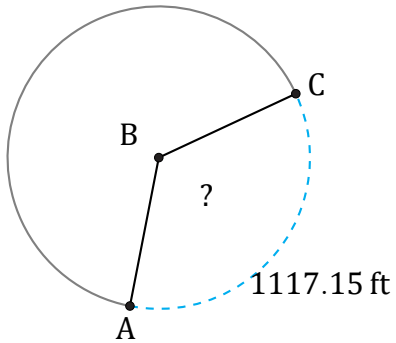


Arc Lengths and Angles (F)

Name: _____

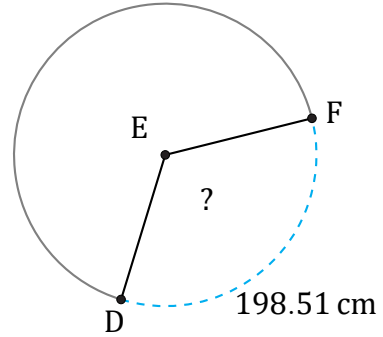
Date: _____

Calculate each arc length or angle measurement.



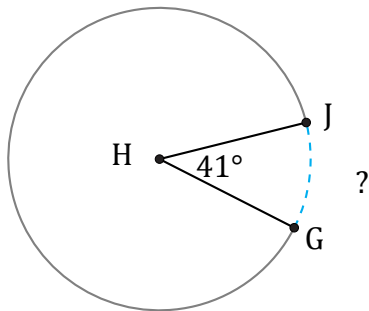
Diameter = 1016 ft

$\angle ABC =$



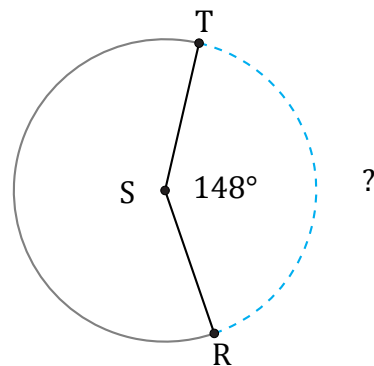
Diameter = 188 cm

$\angle DEF =$



Diameter = 270 km

$\widehat{GJ} =$



Diameter = 8 ft

$\widehat{RT} =$