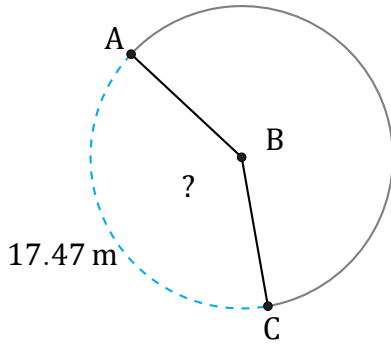


Arc Lengths and Angles (G)

Name: _____

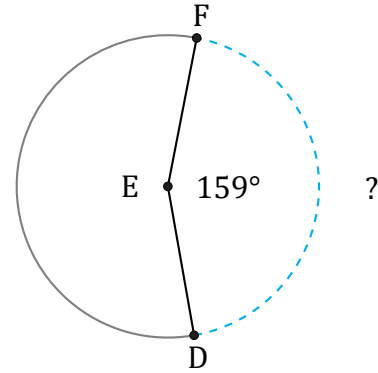
Date: _____

Calculate each arc length or angle measurement.



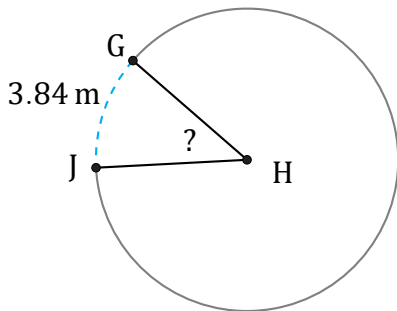
Diameter = 14 m

$\angle ABC =$



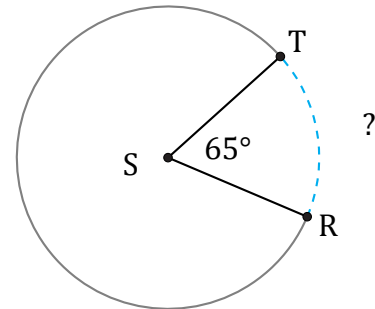
Diameter = 182 cm

$\widehat{DF} =$



Diameter = 10 m

$\angle GHJ =$



Diameter = 12 km

$\widehat{RT} =$