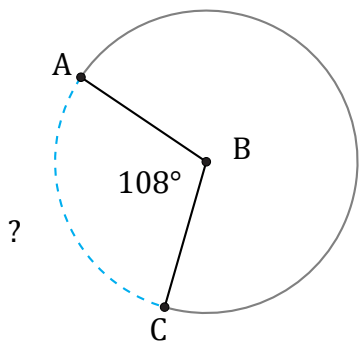


Arc Lengths and Angles (H)

Name: _____

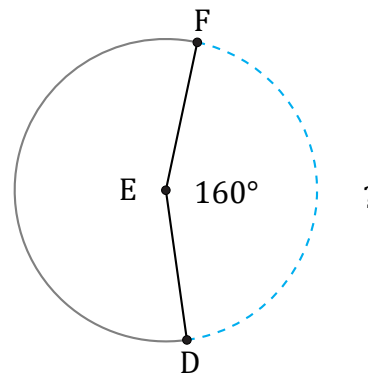
Date: _____

Calculate each arc length or angle measurement.



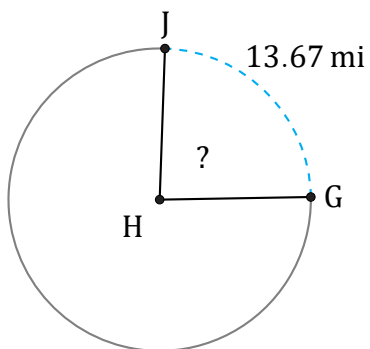
Diameter = 58 ft

$\widehat{AC} =$



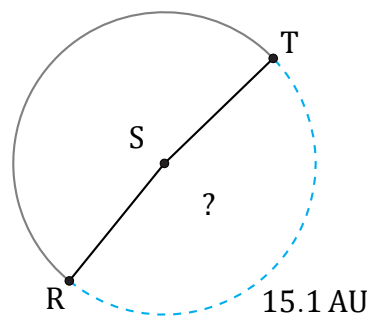
Diameter = 760 m

$\widehat{DF} =$



Diameter = 18 mi

$\angle GHJ =$



Diameter = 10 AU

$\angle RST =$