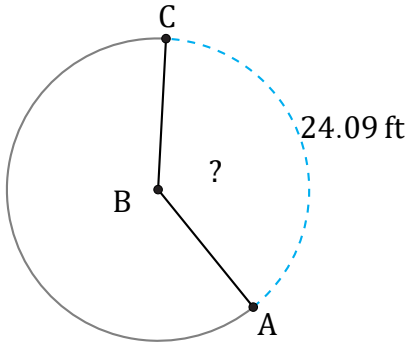


Arc Lengths and Angles (I)

Name: _____

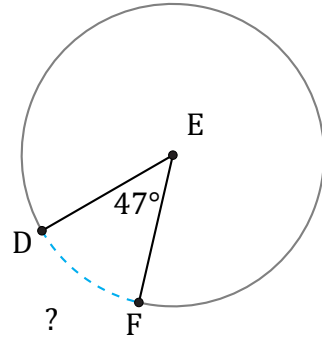
Date: _____

Calculate each arc length or angle measurement.



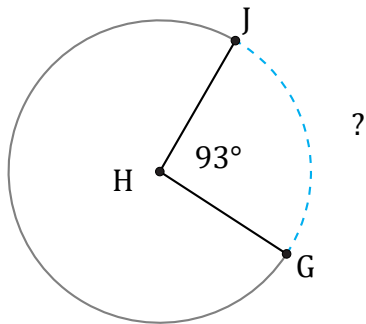
Diameter = 20 ft

$\angle ABC =$



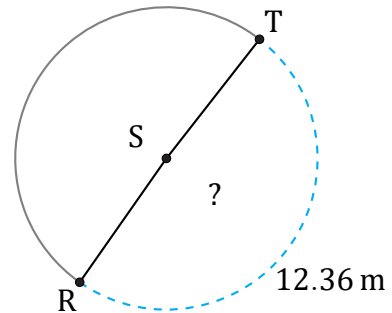
Diameter = 114 ft

$\widehat{DF} =$



Diameter = 1308 cm

$\widehat{GJ} =$



Diameter = 8 m

$\angle RST =$