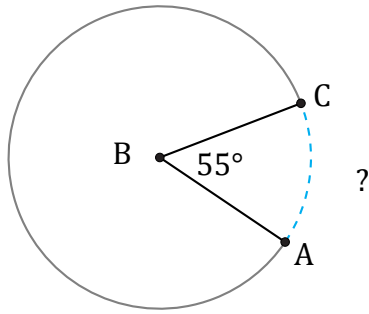


Arc Lengths and Angles (A)

Name: _____

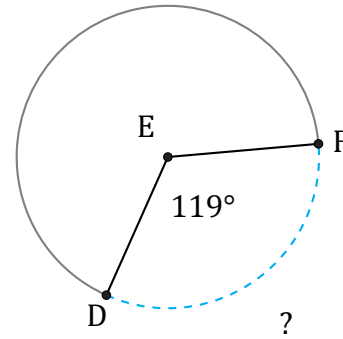
Date: _____

Calculate each arc length or angle measurement.



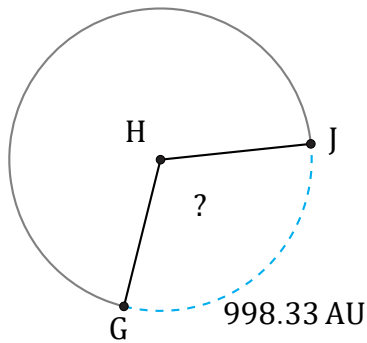
Radius = 925 in

$\widehat{AC} =$



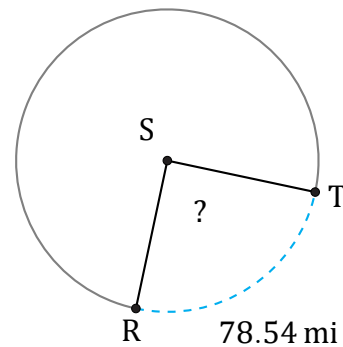
Diameter = 24 mm

$\widehat{DF} =$



Radius = 520 AU

$\angle GHJ =$



Diameter = 100 mi

$\angle RST =$