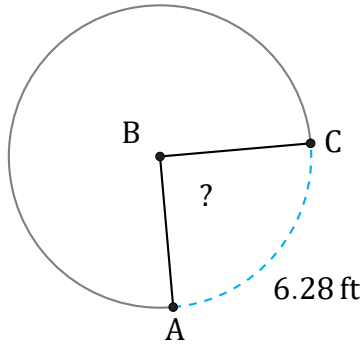


Arc Lengths and Angles (E)

Name: _____

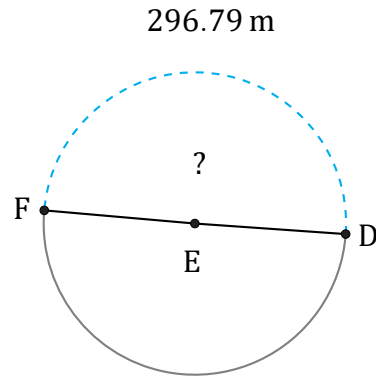
Date: _____

Calculate each arc length or angle measurement.



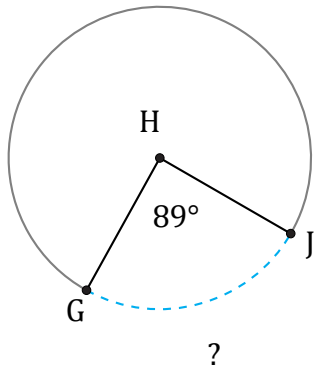
Diameter = 8 ft

$\angle ABC =$



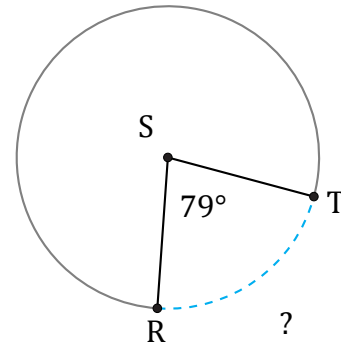
Radius = 95 m

$\angle DEF =$



Radius = 96 mm

$\widehat{GJ} =$



Diameter = 1388 in

$\widehat{RT} =$