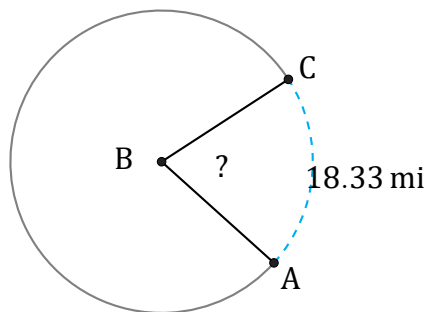


Arc Lengths and Angles (H)

Name: _____

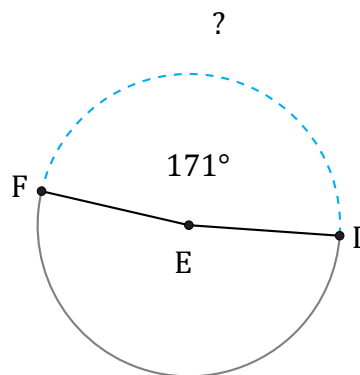
Date: _____

Calculate each arc length or angle measurement.



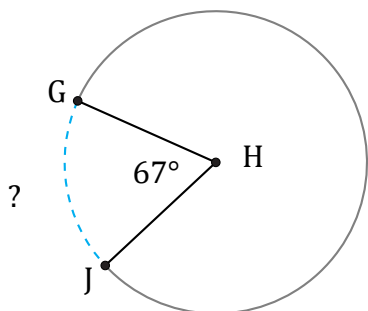
Radius = 14 mi

$\angle ABC =$



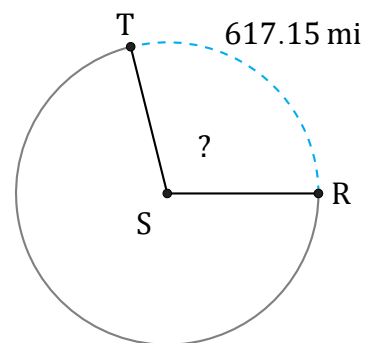
Diameter = 18 km

$\widehat{DF} =$



Radius = 843 mm

$\widehat{GJ} =$



Diameter = 680 mi

$\angle RST =$