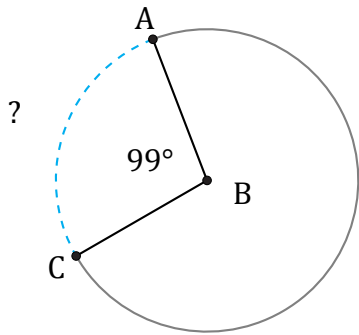


# Arc Lengths and Angles (J)

Name: \_\_\_\_\_

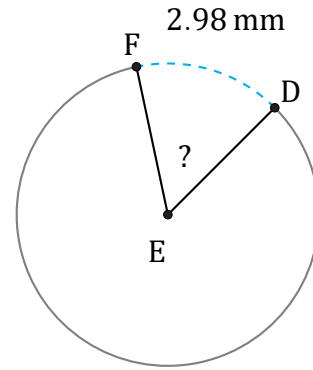
Date: \_\_\_\_\_

Calculate each arc length or angle measurement.



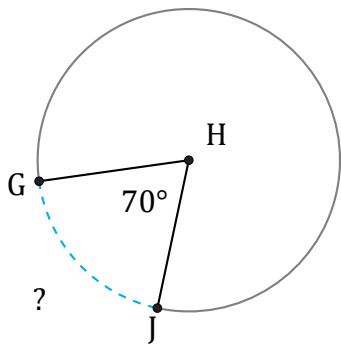
Diameter = 16 m

$\widehat{AC} =$



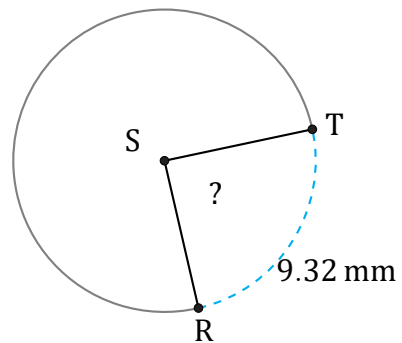
Diameter = 6 mm

$\angle DEF =$



Radius = 9 km

$\widehat{GJ} =$



Radius = 6 mm

$\angle RST =$