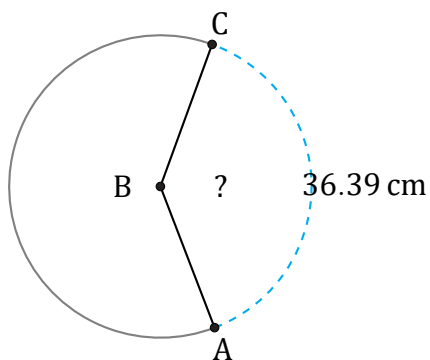


Arc Lengths and Angles (F)

Name: _____

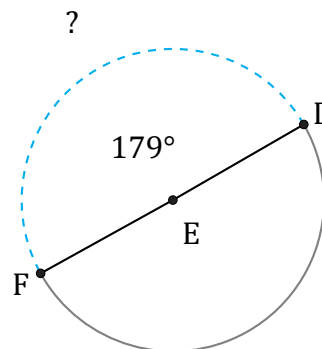
Date: _____

Calculate each arc length or angle measurement.



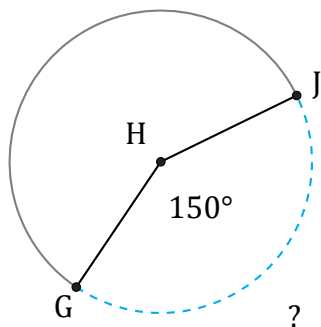
Radius = 15 cm

$\angle ABC =$



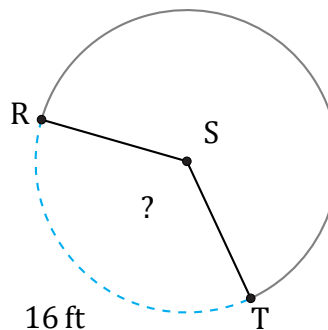
Radius = 138 m

$\widehat{DF} =$



Radius = 2 mm

$\widehat{GJ} =$



Radius = 7 ft

$\angle RST =$