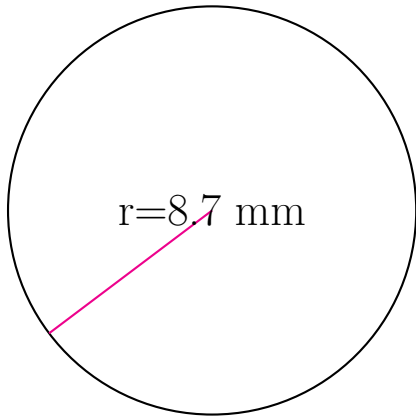
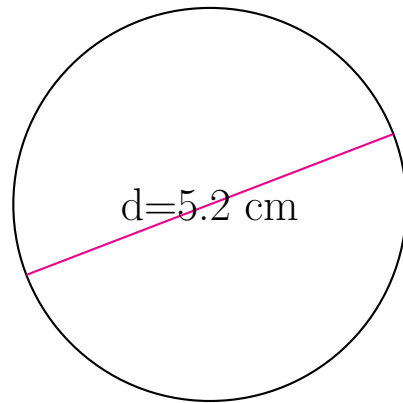


Area and Circumference of Circles (A)

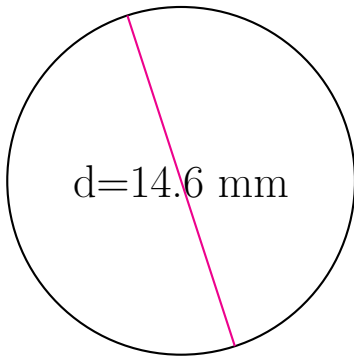
Calculate the area and circumference of each circle.



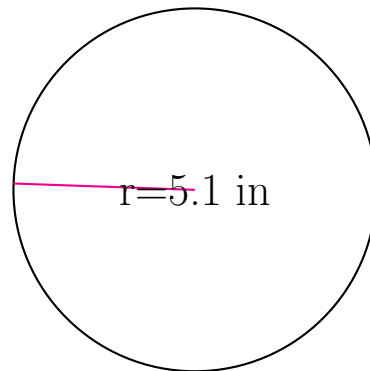
circumference = _____
area = _____



circumference = _____
area = _____



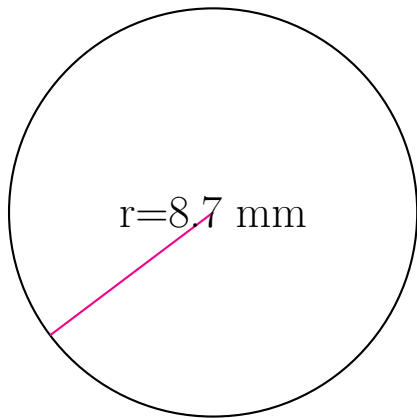
circumference = _____
area = _____



circumference = _____
area = _____

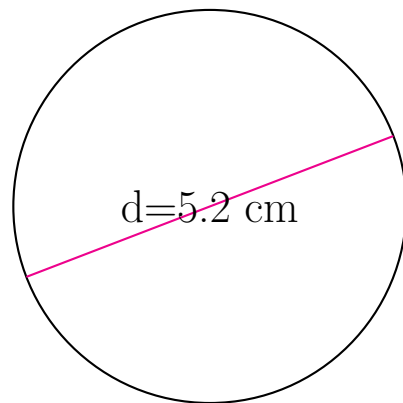
Area and Circumference of Circles (A) Answers

Calculate the area and circumference of each circle.



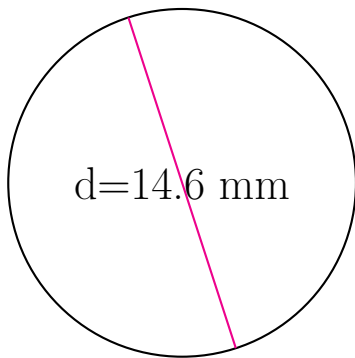
circumference = 54.664 mm

area = 237.787 mm²



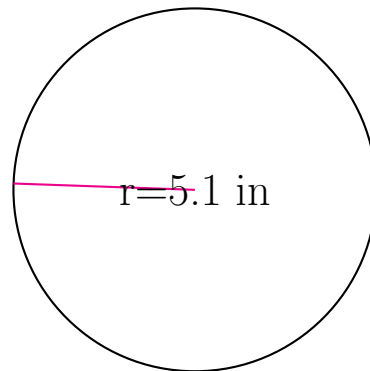
circumference = 16.336 cm

area = 21.237 cm²



circumference = 45.867 mm

area = 167.415 mm²



circumference = 32.044 in

area = 81.713 in²