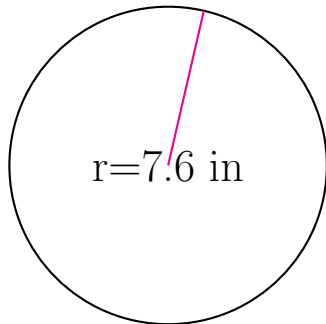
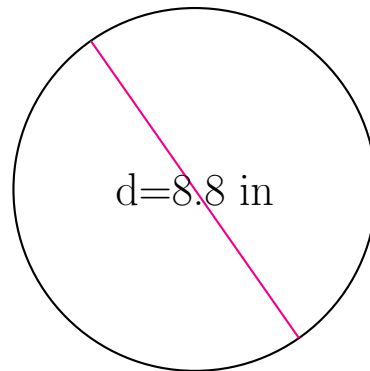


## Area and Circumference of Circles (C)

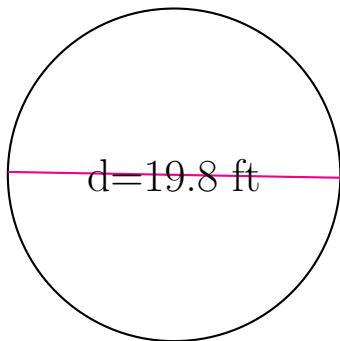
Calculate the area and circumference of each circle.



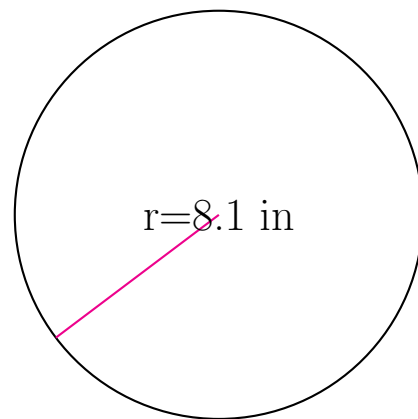
circumference = \_\_\_\_\_  
area = \_\_\_\_\_



circumference = \_\_\_\_\_  
area = \_\_\_\_\_



circumference = \_\_\_\_\_  
area = \_\_\_\_\_



circumference = \_\_\_\_\_  
area = \_\_\_\_\_